




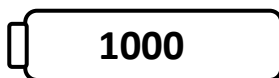
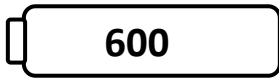
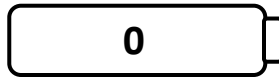







Name \_\_\_\_\_

Score: \_\_\_\_\_

# Rounding Robots

Round the numbers on the robots to the nearest hundred. Draw a line from each robot to the correct battery.



Name \_\_\_\_\_

Score: \_\_\_\_\_

## Rounding Robots **Answer Key**

Round the numbers on the robots to the nearest hundred. Draw a line from each robot to the correct battery.

652 - 700

111 - 100

225 - 200

421 - 400

689 - 700

895 - 900

785 - 800

420 - 400

312 - 300

786 - 800

965 - 1000