








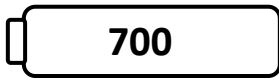
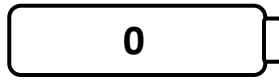







Name _____

Score: _____

Rounding Robots

Round the numbers on the robots to the nearest hundred. Draw a line from each robot to the correct battery.



Name _____

Score: _____

Rounding Robots **Answer Key**

Round the numbers on the robots to the nearest hundred. Draw a line from each robot to the correct battery.

201 - 200

10 - 0

214 - 200

389 - 400

632 - 600

450 - 500

189 - 200

639 - 600

786 - 800

801 - 800

991 - 1000