





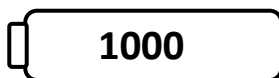
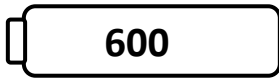
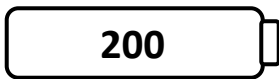
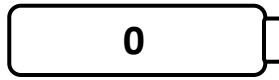







Name \_\_\_\_\_

Score: \_\_\_\_\_

# Rounding Robots

Round the numbers on the robots to the nearest hundred. Draw a line from each robot to the correct battery.



Name \_\_\_\_\_

Score: \_\_\_\_\_

## Rounding Robots **Answer Key**

Round the numbers on the robots to the nearest hundred. Draw a line from each robot to the correct battery.

852 - 900

356 - 400

480 - 500

555 - 600

954 - 1000

235 - 200

890 - 900

596 - 600

254 - 300

80 - 100

389 - 400