





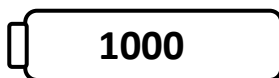
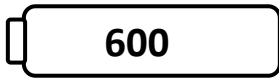
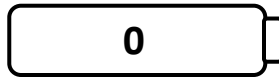







Name _____

Score: _____

Rounding Robots

Round the numbers on the robots to the nearest hundred. Draw a line from each robot to the correct battery.



Name _____

Score: _____

Rounding Robots **Answer Key**

Round the numbers on the robots to the nearest hundred. Draw a line from each robot to the correct battery.

116 - 100

49 - 0

269 - 300

335 - 300

589 - 600

616 - 600

749 - 700

899 - 900

901 - 900

998 - 1000

304 - 300