





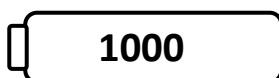
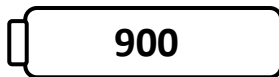

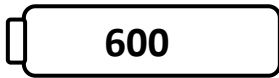
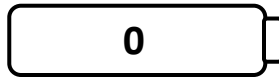







Name _____

Score: _____

Rounding Robots

Round the numbers on the robots to the nearest hundred. Draw a line from each robot to the correct battery.



Name _____

Score: _____

Rounding Robots **Answer Key**

Round the numbers on the robots to the nearest hundred. Draw a line from each robot to the correct battery.

555 - 600

485 - 500

950 - 1000

352 - 400

656 - 700

523 - 500

788 - 800

218 - 200

113 - 100

42 - 00

389 - 400