








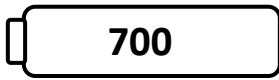
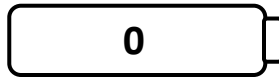







Name \_\_\_\_\_

Score: \_\_\_\_\_

# Rounding Robots

Round the numbers on the robots to the nearest hundred. Draw a line from each robot to the correct battery.



Name \_\_\_\_\_

Score: \_\_\_\_\_

## Rounding Robots **Answer Key**

Round the numbers on the robots to the nearest hundred. Draw a line from each robot to the correct battery.

**37 - 0**

**369 - 400**

**225 - 200**

**195 - 200**

**894 - 900**

**359 - 400**

**812 - 800**

**999 - 1000**

**647 - 600**

**859 - 900**

**369 - 400**