






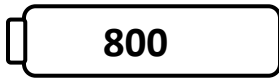
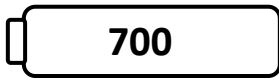
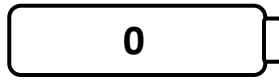







Name _____

Score: _____

Rounding Robots

Round the numbers on the robots to the nearest hundred. Draw a line from each robot to the correct battery.



Name _____

Score: _____

Rounding Robots **Answer Key**

Round the numbers on the robots to the nearest hundred. Draw a line from each robot to the correct battery.

45 – 0

987 – 1000

85 – 100

863 – 900

798 – 800

666 – 700

559 – 600

465 – 500

175 – 200

268 – 300

372 - 400