





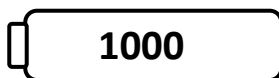
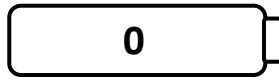







Name _____

Score: _____

Rounding Robots

Round the numbers on the robots to the nearest hundred. Draw a line from each robot to the correct battery.



Name _____

Score: _____

Rounding Robots **Answer Key**

Round the numbers on the robots to the nearest hundred. Draw a line from each robot to the correct battery.

355 - 400

885 - 900

940 - 900

452 - 500

216 - 200

550 - 600

888 - 900

498 - 500

993 - 1000

852 - 900

649 - 600