







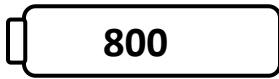
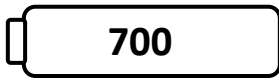
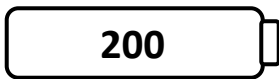
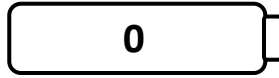







Name \_\_\_\_\_

Score: \_\_\_\_\_

# Rounding Robots

Round the numbers on the robots to the nearest hundred. Draw a line from each robot to the correct battery.



Name \_\_\_\_\_

Score: \_\_\_\_\_

## Rounding Robots **Answer Key**

Round the numbers on the robots to the nearest hundred. Draw a line from each robot to the correct battery.

**35 – 0**

**975 – 1000**

**855 – 900**

**75 – 100**

**185 – 200**

**789 – 800**

**656 – 700**

**288 – 300**

**392 – 400**

**566 – 600**

**485 - 500**