





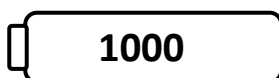
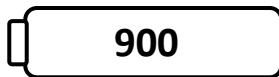

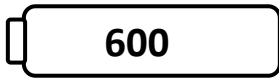
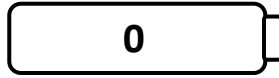







Name _____

Score: _____

Rounding Robots

Round the numbers on the robots to the nearest hundred. Draw a line from each robot to the correct battery.



Name _____

Score: _____

Rounding Robots **Answer Key**

Round the numbers on the robots to the nearest hundred. Draw a line from each robot to the correct battery.

268 - 300

95 - 100

119 - 100

469 - 500

699 - 700

768 - 800

885 - 900

998 - 1000

378 - 400

749 - 700

519 - 500