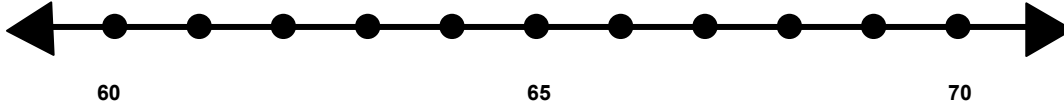


Name \_\_\_\_\_

Score: \_\_\_\_\_

## Rounding to the Nearest Ten

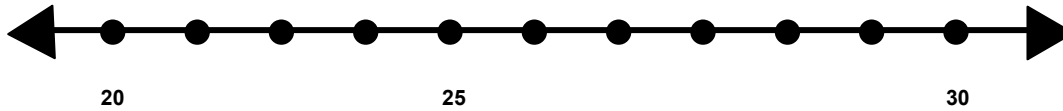
Find 64 on the number line and label it.



Is 64 closer to 60 or 70? \_\_\_\_\_

What is 64 rounded to the nearest 10? \_\_\_\_\_

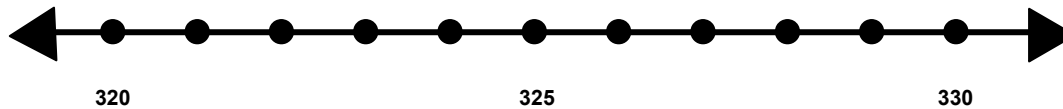
Find 22 on the number line and label it.



Is 22 closer to 20 or 30? \_\_\_\_\_

What is 22 rounded to the nearest 10? \_\_\_\_\_

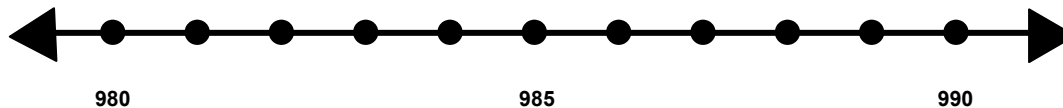
Find 323 on the number line and label it..



Is 323 closer to 320 or 330? \_\_\_\_\_

What is 323 rounded to the nearest 10? \_\_\_\_\_

Find 988 on the number line and label it.



Is 988 closer to 980 or 990? \_\_\_\_\_

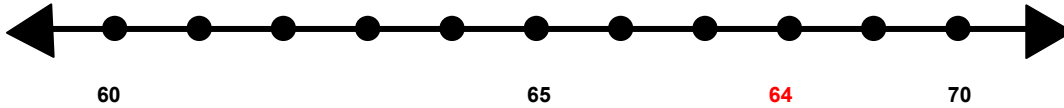
What is 988 rounded to the nearest 10? \_\_\_\_\_

Name \_\_\_\_\_

Score: \_\_\_\_\_

## Rounding to the Nearest Ten **ANSWER KEY**

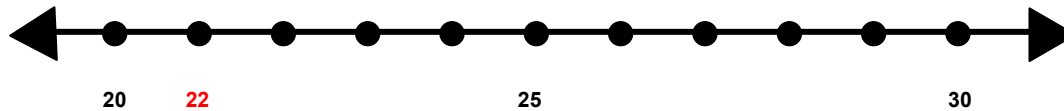
Find 64 on the number line and label it.



Is 64 closer to 60 or 70? **60**

What is 64 rounded to the nearest 10? **60**

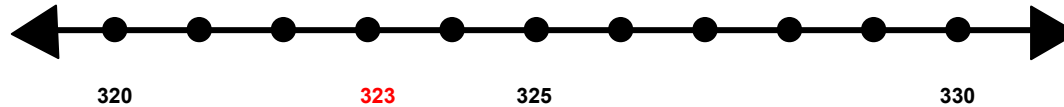
Find 22 on the number line and label it.



Is 22 closer to 20 or 30? **20**

What is 22 rounded to the nearest 10? **20**

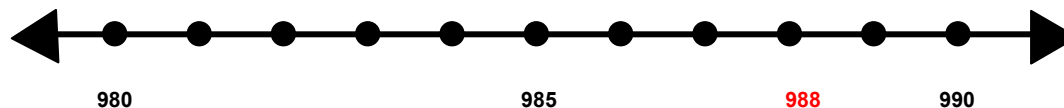
Find 323 on the number line and label it..



Is 323 closer to 320 or 330? **320**

What is 323 rounded to the nearest 10? **320**

Find 988 on the number line and label it.



Is 988 closer to 980 or 990? **990**

What is 988 rounded to the nearest 10? **990**