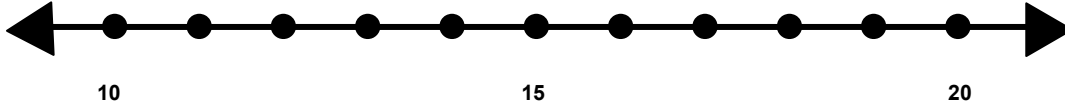


Name _____

Score: _____

Rounding to the Nearest Ten

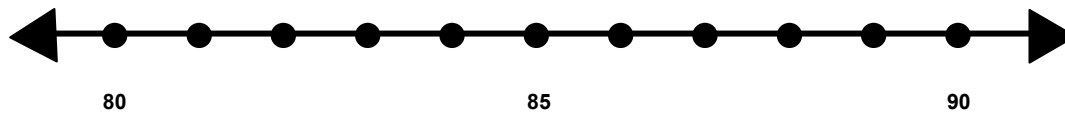
Find 14 on the number line and label it.



Is 14 closer to 10 or 20? _____

What is 14 rounded to the nearest 10? _____

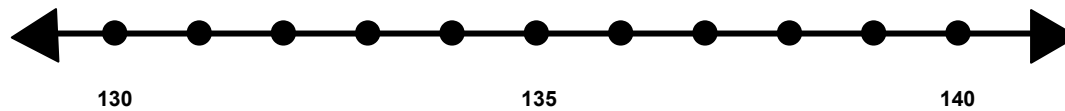
Find 83 on the number line and label it.



Is 83 closer to 80 or 90? _____

What is 83 rounded to the nearest 10? _____

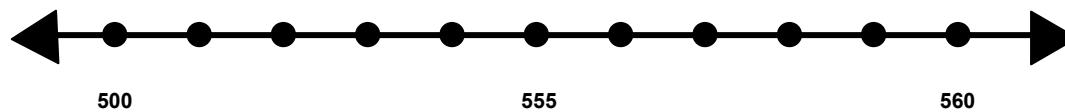
Find 139 on the number line and label it..



Is 139 closer to 130 or 140? _____

What is 139 rounded to the nearest 10? _____

Find 558 on the number line and label it.



Is 558 closer to 500 or 560? _____

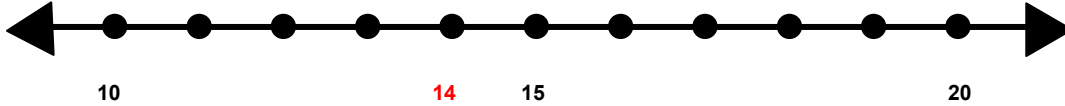
What is 558 rounded to the nearest 10? _____

Name _____

Score: _____

Rounding to the Nearest Ten **ANSWER KEY**

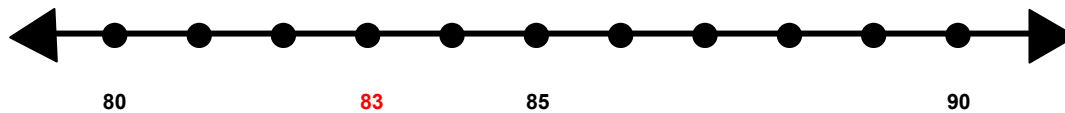
Find 14 on the number line and label it.



Is 14 closer to 10 or 20? **10**

What is 14 rounded to the nearest 10? **10**

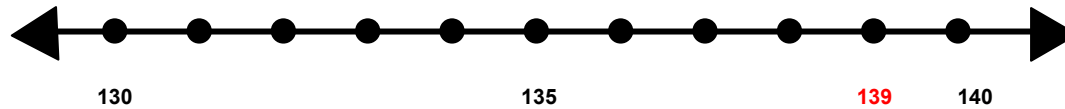
Find 83 on the number line and label it.



Is 83 closer to 80 or 90? **80**

What is 83 rounded to the nearest 10? **80**

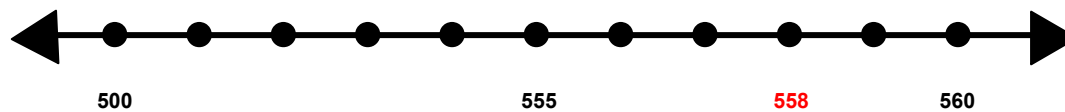
Find 139 on the number line and label it..



Is 139 closer to 130 or 140? **140**

What is 139 rounded to the nearest 10? **140**

Find 558 on the number line and label it.



Is 558 closer to 500 or 560? **560**

What is 558 rounded to the nearest 10? **560**