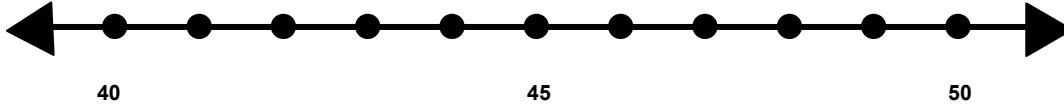


Name _____

Score: _____

Rounding to the Nearest Ten

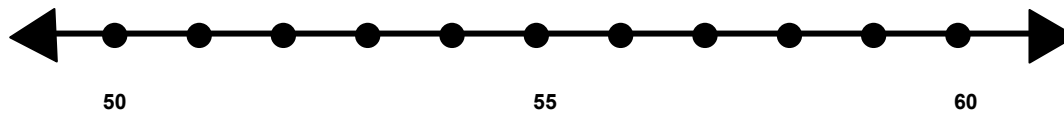
Find 42 on the number line and label it.



Is 42 closer to 40 or 50? _____

What is 42 rounded to the nearest 10? _____

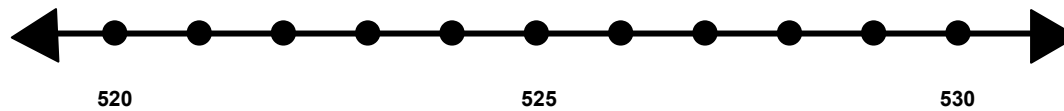
Find 59 on the number line and label it.



Is 59 closer to 50 or 60? _____

What is 59 rounded to the nearest 10? _____

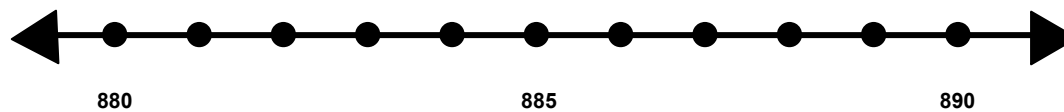
Find 527 on the number line and label it..



Is 527 closer to 520 or 530? _____

What is 527 rounded to the nearest 10? _____

Find 886 on the number line and label it.



Is 886 closer to 880 or 890? _____

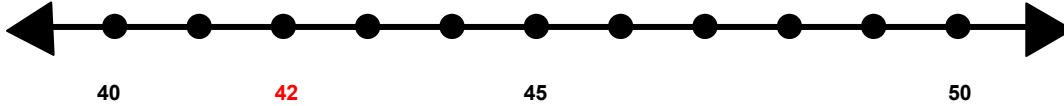
What is 886 rounded to the nearest 10? _____

Name _____

Score: _____

Rounding to the Nearest Ten **ANSWER KEY**

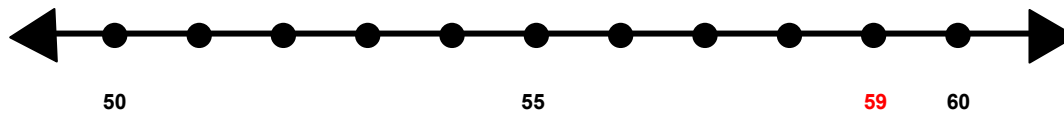
Find 42 on the number line and label it.



Is 42 closer to 40 or 50? **40**

What is 42 rounded to the nearest 10? **40**

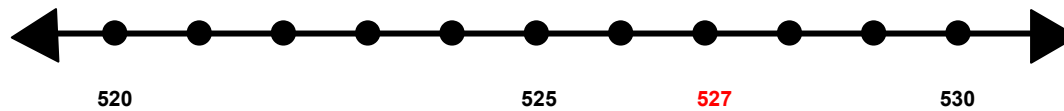
Find 59 on the number line and label it.



Is 59 closer to 50 or 60? **60**

What is 59 rounded to the nearest 10? **60**

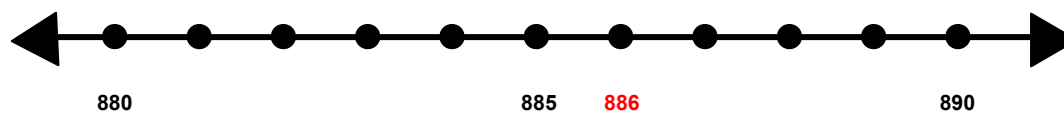
Find 527 on the number line and label it..



Is 527 closer to 520 or 530? **530**

What is 527 rounded to the nearest 10? **530**

Find 886 on the number line and label it.



Is 886 closer to 880 or 890? **890**

What is 886 rounded to the nearest 10? **890**