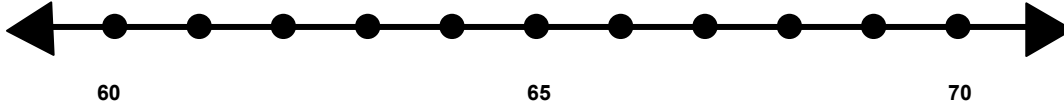


Name _____

Score: _____

Rounding to the Nearest Ten

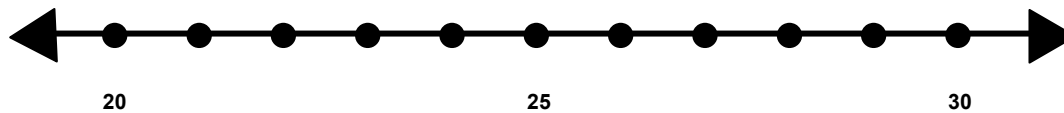
Find 62 on the number line and label it.



Is 62 closer to 70 or 80? _____

What is 62 rounded to the nearest 10? _____

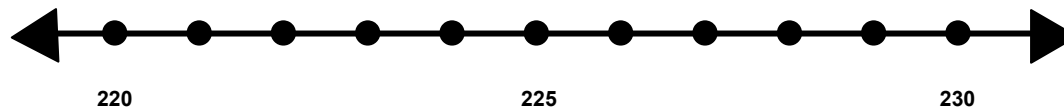
Find 29 on the number line and label it.



Is 29 closer to 20 or 30? _____

What is 29 rounded to the nearest 10? _____

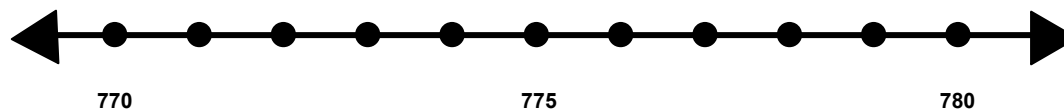
Find 227 on the number line and label it..



Is 227 closer to 220 or 230? _____

What is 227 rounded to the nearest 10? _____

Find 777 on the number line and label it.



Is 777 closer to 770 or 780? _____

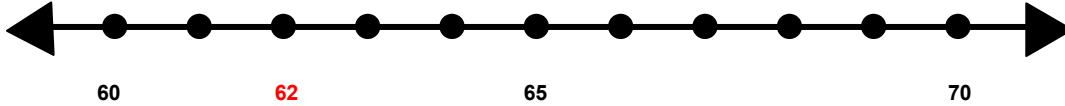
What is 777 rounded to the nearest 10? _____

Name _____

Score: _____

Rounding to the Nearest Ten **ANSWER KEY**

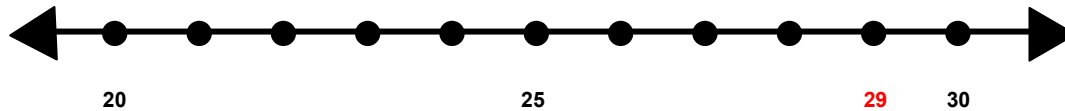
Find 62 on the number line and label it.



Is 62 closer to 60 or 70? **60**

What is 62 rounded to the nearest 10? **60**

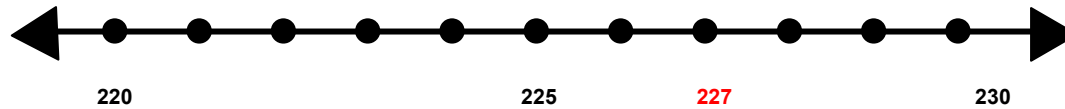
Find 29 on the number line and label it.



Is 29 closer to 20 or 30? **30**

What is 29 rounded to the nearest 10? **30**

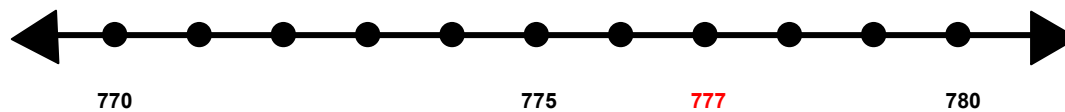
Find 227 on the number line and label it..



Is 227 closer to 220 or 230? **230**

What is 227 rounded to the nearest 10? **230**

Find 777 on the number line and label it.



Is 777 closer to 770 or 780? **780**

What is 777 rounded to the nearest 10? **780**