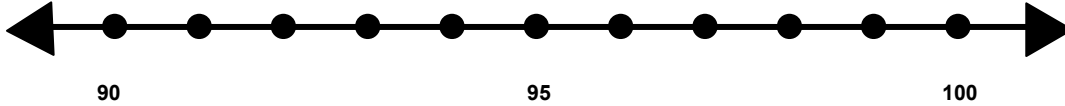


Name _____

Score: _____

Rounding to the Nearest Ten

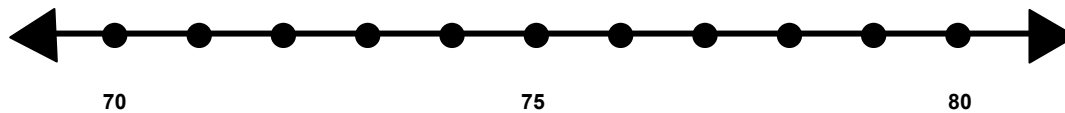
Find 99 on the number line and label it.



Is 99 closer to 90 or 100? _____

What is 99 rounded to the nearest 10? _____

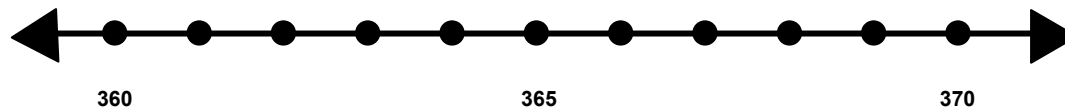
Find 74 on the number line and label it.



Is 74 closer to 70 or 80? _____

What is 74 rounded to the nearest 10? _____

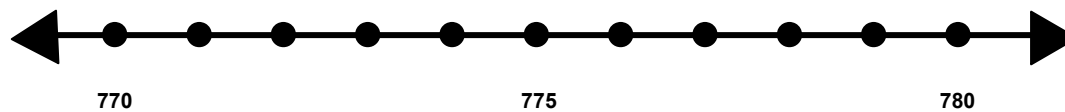
Find 361 on the number line and label it..



Is 361 closer to 360 or 370? _____

What is 361 rounded to the nearest 10? _____

Find 777 on the number line and label it.



Is 777 closer to 770 or 780? _____

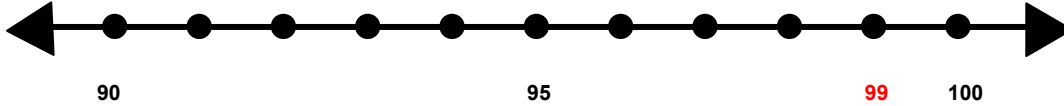
What is 777 rounded to the nearest 10? _____

Name _____

Score: _____

Rounding to the Nearest Ten **ANSWER KEY**

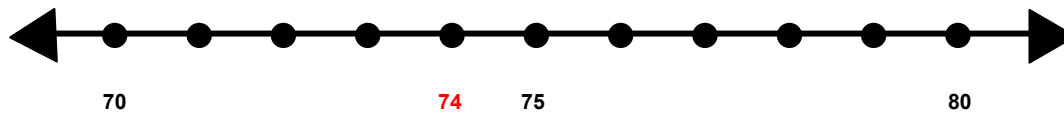
Find 99 on the number line and label it.



Is 99 closer to 90 or 100? **100**

What is 99 rounded to the nearest 10? **100**

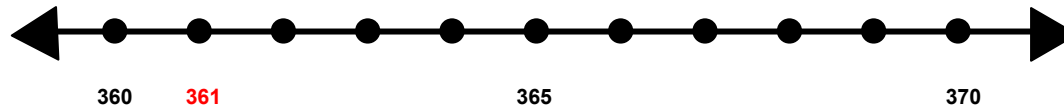
Find 74 on the number line and label it.



Is 74 closer to 70 or 80? **70**

What is 74 rounded to the nearest 10? **70**

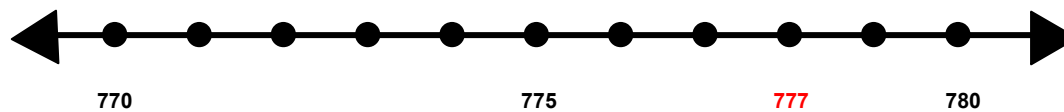
Find 361 on the number line and label it..



Is 361 closer to 360 or 370? **360**

What is 361 rounded to the nearest 10? **360**

Find 777 on the number line and label it.



Is 777 closer to 770 or 780? **780**

What is 777 rounded to the nearest 10? **780**