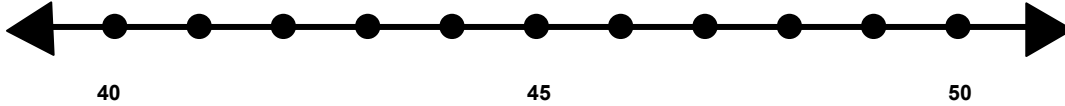


Name _____

Score: _____

Rounding to the Nearest Ten

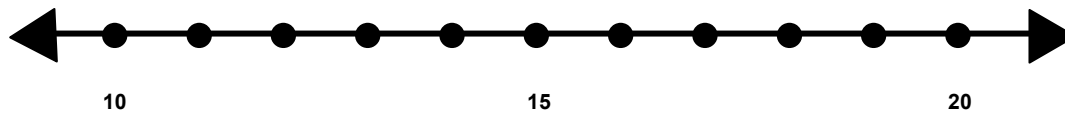
Find 49 on the number line and label it.



Is 49 closer to 40 or 50? _____

What is 49 rounded to the nearest 10? _____

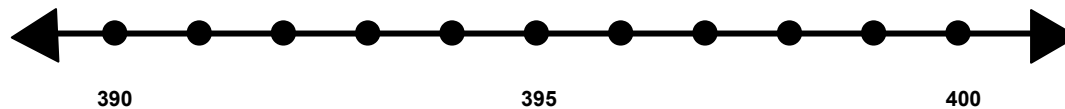
Find 14 on the number line and label it.



Is 14 closer to 10 or 20? _____

What is 14 rounded to the nearest 10? _____

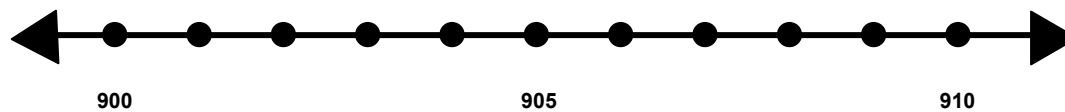
Find 398 on the number line and label it..



Is 398 closer to 390 or 400? _____

What is 398 rounded to the nearest 10? _____

Find 901 on the number line and label it.



Is 901 closer to 900 or 910? _____

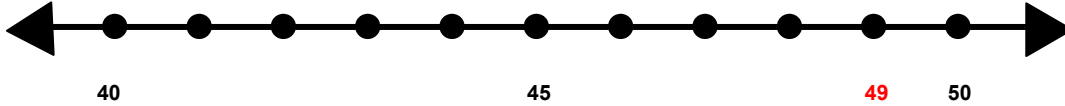
What is 901 rounded to the nearest 10? _____

Name _____

Score: _____

Rounding to the Nearest Ten **ANSWER KEY**

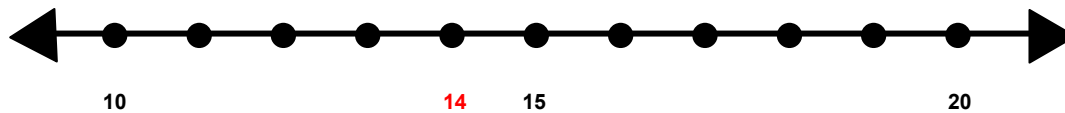
Find 49 on the number line and label it.



Is 49 closer to 40 or 50? **50**

What is 49 rounded to the nearest 10? **50**

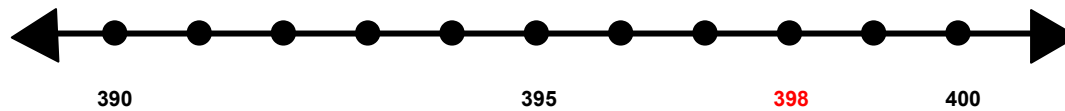
Find 14 on the number line and label it.



Is 14 closer to 10 or 20? **10**

What is 14 rounded to the nearest 10? **10**

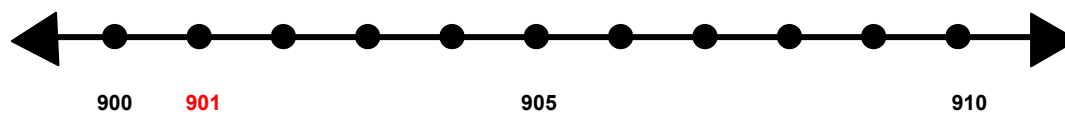
Find 398 on the number line and label it..



Is 398 closer to 390 or 400? **400**

What is 398 rounded to the nearest 10? **400**

Find 901 on the number line and label it.



Is 901 closer to 900 or 910? **900**

What is 901 rounded to the nearest 10? **900**