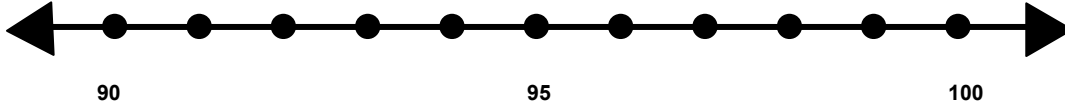


Name _____

Score: _____

Rounding to the Nearest Ten

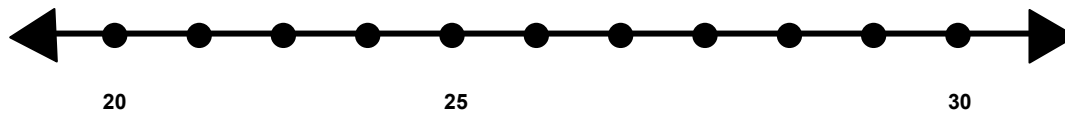
Find 93 on the number line and label it.



Is 93 closer to 90 or 100? _____

What is 93 rounded to the nearest 10? _____

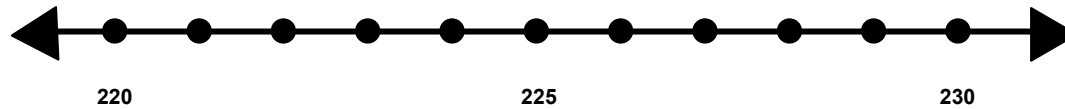
Find 28 on the number line and label it.



Is 28 closer to 20 or 30? _____

What is 28 rounded to the nearest 10? _____

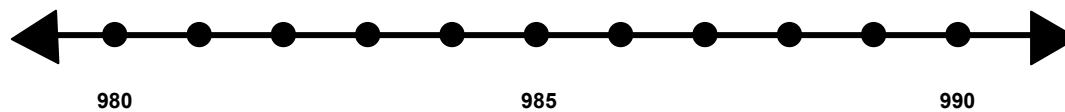
Find 222 on the number line and label it..



Is 222 closer to 220 or 230? _____

What is 222 rounded to the nearest 10? _____

Find 987 on the number line and label it.



Is 987 closer to 980 or 990? _____

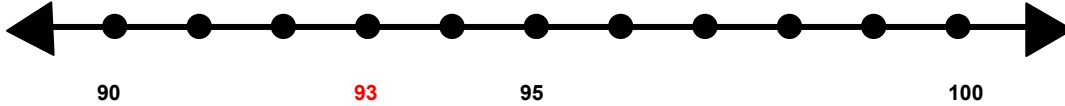
What is 987 rounded to the nearest 10? _____

Name _____

Score: _____

Rounding to the Nearest Ten **ANSWER KEY**

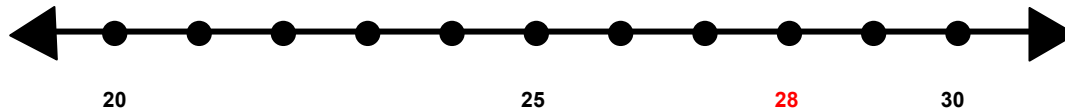
Find 93 on the number line and label it.



Is 93 closer to 90 or 100? **90**

What is 93 rounded to the nearest 10? **90**

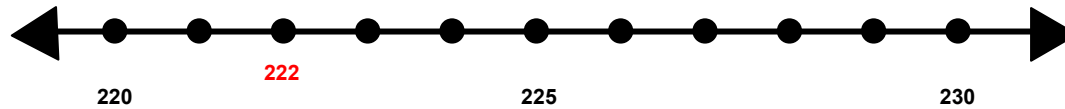
Find 28 on the number line and label it.



Is 28 closer to 20 or 30? **30**

What is 28 rounded to the nearest 10? **30**

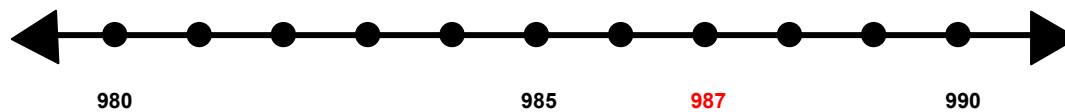
Find 222 on the number line and label it..



Is 222 closer to 220 or 230? **220**

What is 222 rounded to the nearest 10? **220**

Find 987 on the number line and label it.



Is 987 closer to 980 or 990? **990**

What is 987 rounded to the nearest 10? **990**