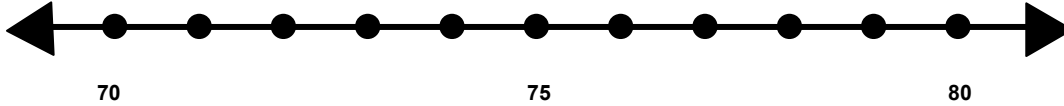


Name \_\_\_\_\_

Score: \_\_\_\_\_

## Rounding to the Nearest Ten

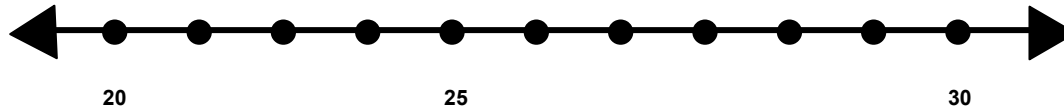
Find 78 on the number line and label it.



Is 78 closer to 70 or 80? \_\_\_\_\_

What is 78 rounded to the nearest 10? \_\_\_\_\_

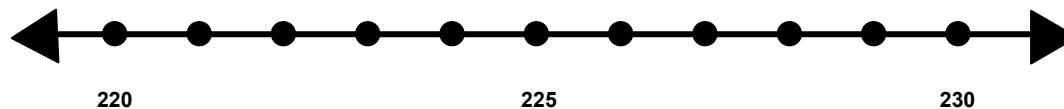
Find 27 on the number line and label it.



Is 27 closer to 20 or 30? \_\_\_\_\_

What is 27 rounded to the nearest 10? \_\_\_\_\_

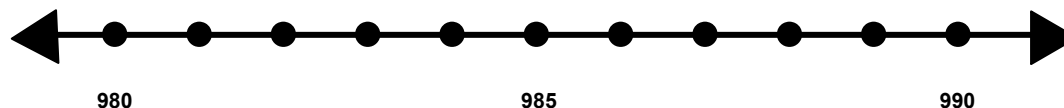
Find 223 on the number line and label it..



Is 223 closer to 220 or 230? \_\_\_\_\_

What is 223 rounded to the nearest 10? \_\_\_\_\_

Find 982 on the number line and label it.



Is 982 closer to 980 or 990? \_\_\_\_\_

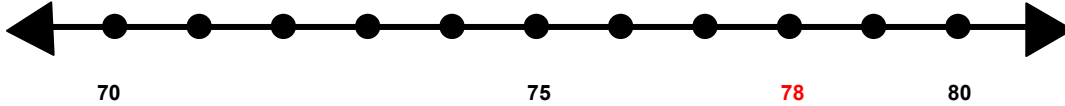
What is 982 rounded to the nearest 10? \_\_\_\_\_

Name \_\_\_\_\_

Score: \_\_\_\_\_

## Rounding to the Nearest Ten **ANSWER KEY**

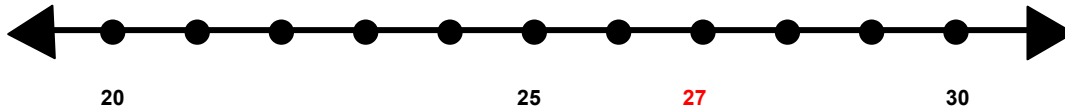
Find 78 on the number line and label it.



Is 78 closer to 70 or 80? **80**

What is 78 rounded to the nearest 10? **80**

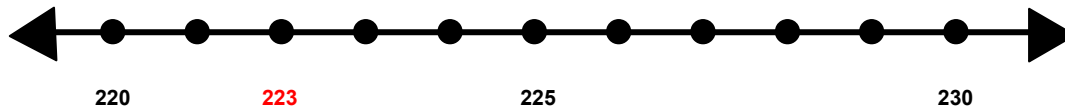
Find 27 on the number line and label it.



Is 27 closer to 20 or 30? **30**

What is 27 rounded to the nearest 10? **30**

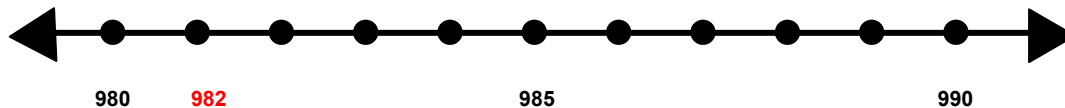
Find 223 on the number line and label it..



Is 223 closer to 220 or 230? **220**

What is 223 rounded to the nearest 10? **220**

Find 982 on the number line and label it.



Is 982 closer to 980 or 990? **980**

What is 982 rounded to the nearest 10? **980**