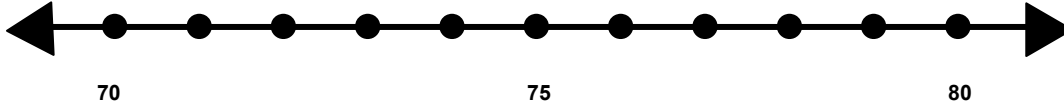


Name _____

Score: _____

Rounding to the Nearest Ten

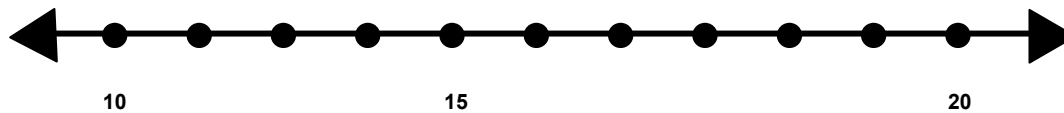
Find 72 on the number line and label it.



Is 72 closer to 70 or 80? _____

What is 72 rounded to the nearest 10? _____

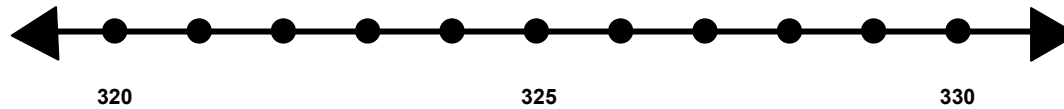
Find 19 on the number line and label it.



Is 19 closer to 10 or 20? _____

What is 19 rounded to the nearest 10? _____

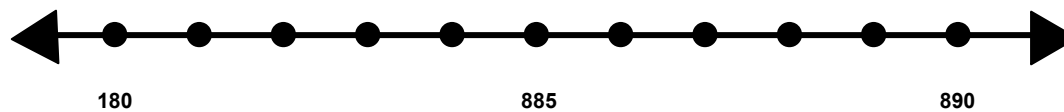
Find 327 on the number line and label it..



Is 327 closer to 320 or 330? _____

What is 327 rounded to the nearest 10? _____

Find 186 on the number line and label it.



Is 186 closer to 180 or 190? _____

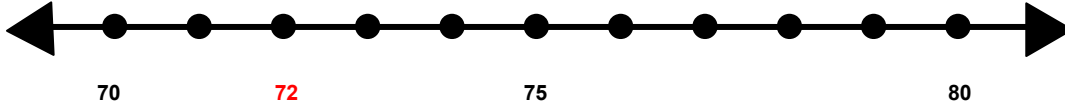
What is 186 rounded to the nearest 10? _____

Name _____

Score: _____

Rounding to the Nearest Ten **ANSWER KEY**

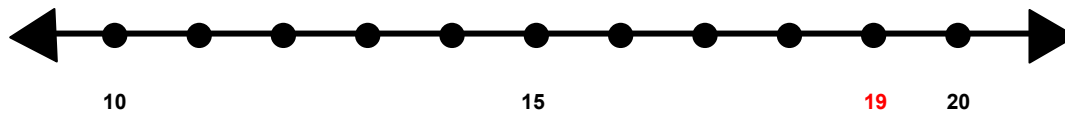
Find 72 on the number line and label it.



Is 72 closer to 70 or 80? **70**

What is 72 rounded to the nearest 10? **70**

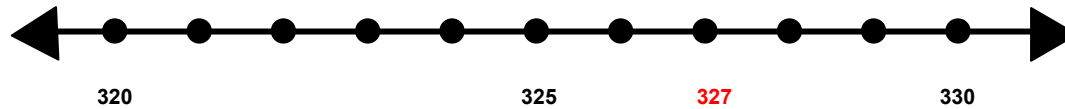
Find 19 on the number line and label it.



Is 19 closer to 10 or 20? **20**

What is 19 rounded to the nearest 10? **20**

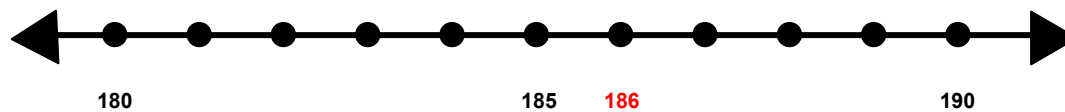
Find 327 on the number line and label it..



Is 327 closer to 320 or 330? **330**

What is 327 rounded to the nearest 10? **330**

Find 186 on the number line and label it.



Is 186 closer to 180 or 190? **190**

What is 186 rounded to the nearest 10? **190**