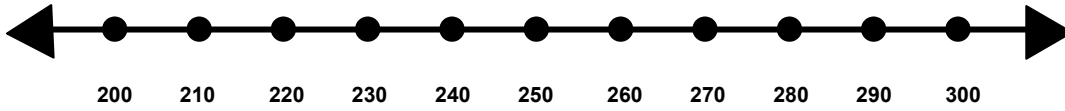


Name \_\_\_\_\_

Score: \_\_\_\_\_

## Rounding to the Nearest Hundred

Show where the number 215 would fall on the number line.

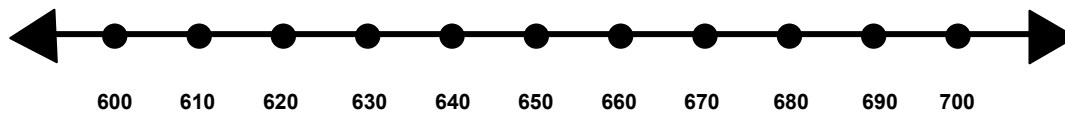


Is 215 closer to 100 or 200? \_\_\_\_\_

Does 215 rounds up or round down to the nearest hundred? \_\_\_\_\_

What is 215 rounded to the nearest hundred? \_\_\_\_\_

Show where the number 660 would fall on the number line.

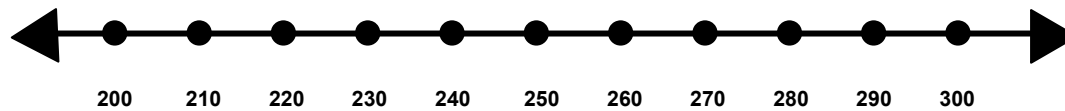


Is 660 closer to 600 or 700? \_\_\_\_\_

Does 660 round up or round down to the nearest hundred? \_\_\_\_\_

What is 660 rounded to the nearest hundred? \_\_\_\_\_

Show where the number 270 would fall on the number line.



Is 270 closer to 200 or 300? \_\_\_\_\_

Does 270 round up or round down to the nearest hundred? \_\_\_\_\_

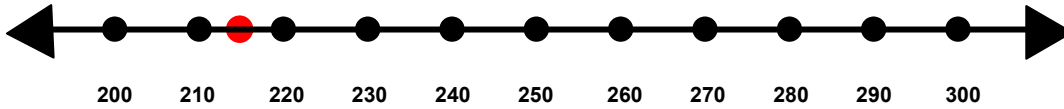
What is 270 rounded to the nearest hundred? \_\_\_\_\_

Name \_\_\_\_\_

Score: \_\_\_\_\_

## Rounding to the Nearest Hundred **ANSWER KEY**

Show where the number 215 would fall on the number line.

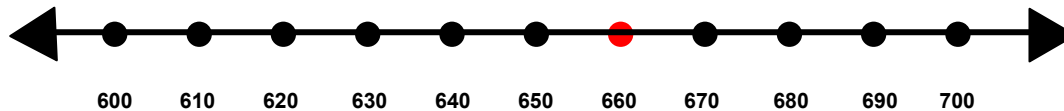


Is 215 closer to 100 or 200? **200**

Does 215 rounds up or round down to the nearest hundred? **round down**

What is 215 rounded to the nearest hundred? **200**

Show where the number 660 would fall on the number line.

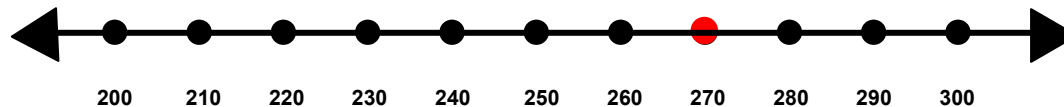


Is 660 closer to 600 or 700? **700**

Does 660 round up or round down to the nearest hundred? **round up**

What is 660 rounded to the nearest hundred? **700**

Show where the number 270 would fall on the number line.



Is 270 closer to 200 or 300? **300**

Does 270 round up or round down to the nearest hundred? **round up**

What is 270 rounded to the nearest hundred? **300**