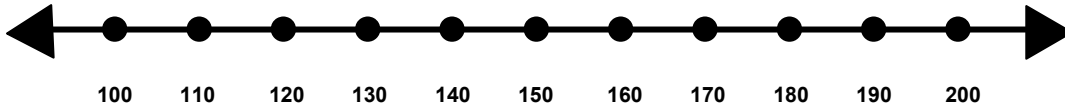


Name _____

Score: _____

Rounding to the Nearest Hundred

Show where the number 145 would fall on the number line.

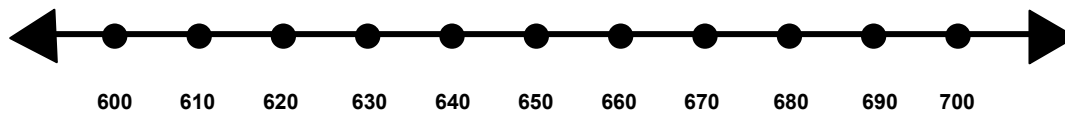


Is 145 closer to 100 or 200? _____

Does 145 round up or round down to the nearest hundred? _____

What is 145 rounded to the nearest hundred? _____

Show where the number 673 would fall on the number line.

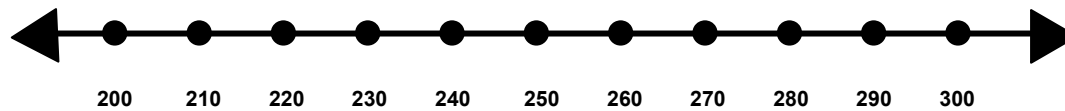


Is 673 closer to 600 or 700? _____

Does 673 round up or round down to the nearest hundred? _____

What is 673 rounded to the nearest hundred? _____

Show where the number 277 would fall on the number line.



Is 277 closer to 200 or 300? _____

Does 277 round up or round down to the nearest hundred? _____

What is 277 rounded to the nearest hundred? _____

Name _____

Score: _____

Rounding to the Nearest Hundred **ANSWER KEY**

Show where the number 145 would fall on the number line.

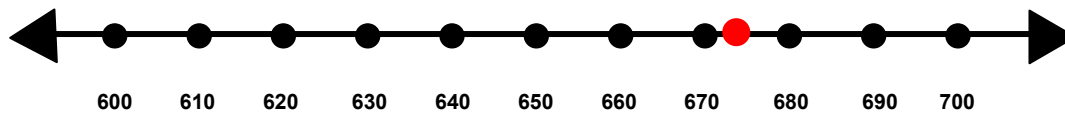


Is 145 closer to 100 or 200? **100**

Does 145 round up or round down to the nearest hundred? **Round down**

What is 145 rounded to the nearest hundred? **100**

Show where the number 673 would fall on the number line.

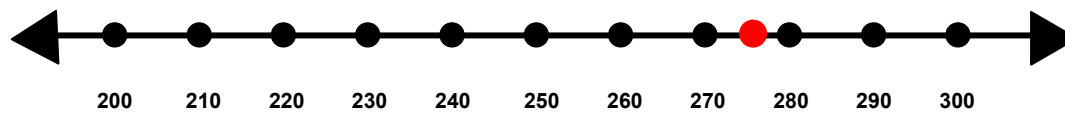


Is 673 closer to 600 or 700? **700**

Does 673 round up or round down to the nearest hundred? **Round up**

What is 673 rounded to the nearest hundred? **700**

Show where the number 277 would fall on the number line.



Is 277 closer to 200 or 300? **300**

Does 277 round up or round down to the nearest hundred? **Round up**

What is 277 rounded to the nearest hundred? **300**