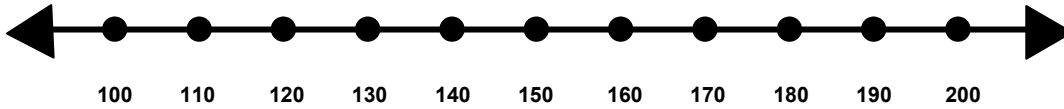


Name _____

Score: _____

Rounding to the Nearest Hundred

Show where the number 175 would fall on the number line.

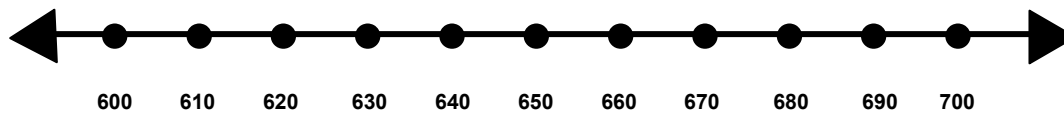


Is 175 closer to 100 or 200? _____

Does 175 round up or round down to the nearest hundred? _____

What is 175 rounded to the nearest hundred? _____

Show where the number 615 would fall on the number line.

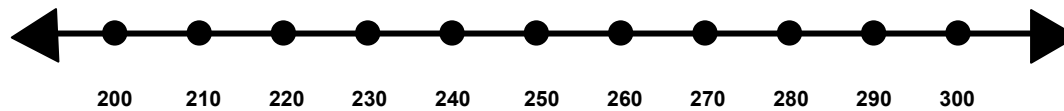


Is 615 closer to 600 or 700? _____

Does 615 round up or round down to the nearest hundred? _____

What is 615 rounded to the nearest hundred? _____

Show where the number 288 would fall on the number line.



Is 288 closer to 200 or 300? _____

Does 288 round up or round down to the nearest hundred? _____

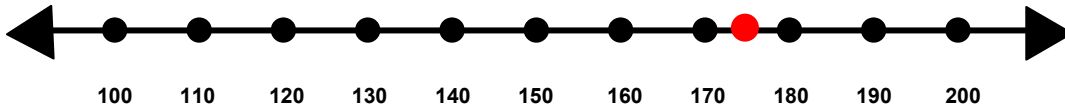
What is 288 rounded to the nearest hundred? _____

Name _____

Score: _____

Rounding to the Nearest Hundred **ANSWER KEY**

Show where the number 175 would fall on the number line.

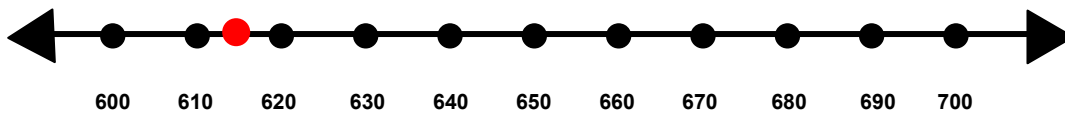


Is 175 closer to 100 or 200? **200**

Does 175 round up or round down to the nearest hundred? **Round up**

What is 175 rounded to the nearest hundred? **200**

Show where the number 615 would fall on the number line.

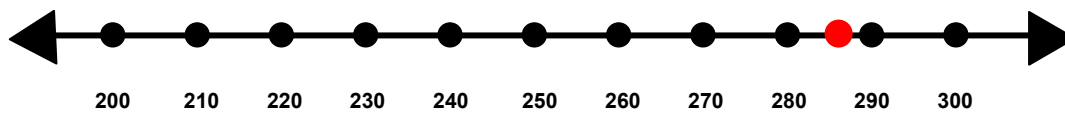


Is 615 closer to 600 or 700? **600**

Does 615 round up or round down to the nearest hundred? **Round down**

What is 615 rounded to the nearest hundred? **600**

Show where the number 288 would fall on the number line.



Is 288 closer to 200 or 300? **300**

Does 288 round up or round down to the nearest hundred? **Round up**

What is 288 rounded to the nearest hundred? **300**