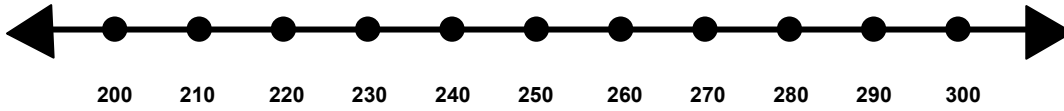


Name \_\_\_\_\_

Score: \_\_\_\_\_

## Rounding to the Nearest Hundred

Show where the number 270 would fall on the number line.

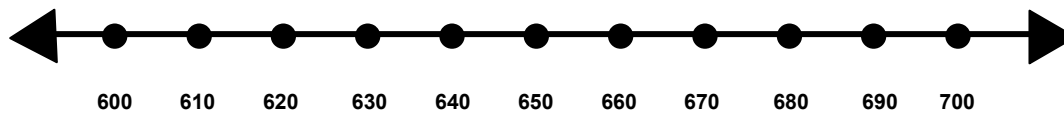


Is 270 closer to 200 or 300? \_\_\_\_\_

Does 270 round up or round down to the nearest hundred? \_\_\_\_\_

What is 270 rounded to the nearest hundred? \_\_\_\_\_

Show where the number 690 would fall on the number line.

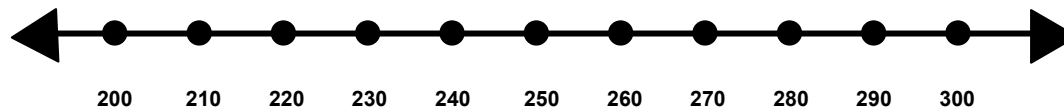


Is 690 closer to 600 or 700? \_\_\_\_\_

Does 690 round up or round down to the nearest hundred? \_\_\_\_\_

What is 690 rounded to the nearest hundred? \_\_\_\_\_

Show where the number 225 would fall on the number line.



Is 225 closer to 200 or 300? \_\_\_\_\_

Does 225 round up or round down to the nearest hundred? \_\_\_\_\_

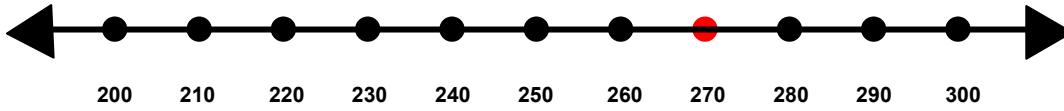
What is 225 rounded to the nearest hundred? \_\_\_\_\_

Name \_\_\_\_\_

Score: \_\_\_\_\_

## Rounding to the Nearest Hundred **ANSWER KEY**

Show where the number 270 would fall on the number line.

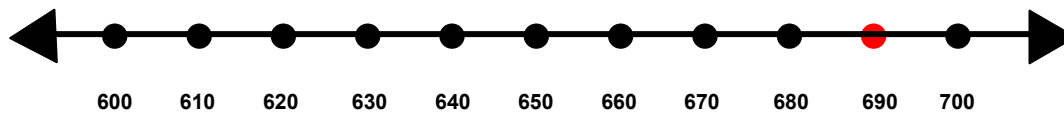


Is 270 closer to 100 or 200? **300**

Does 270 round up or round down to the nearest hundred? **round up**

What is 270 rounded to the nearest hundred? **300**

Show where the number 690 would fall on the number line.

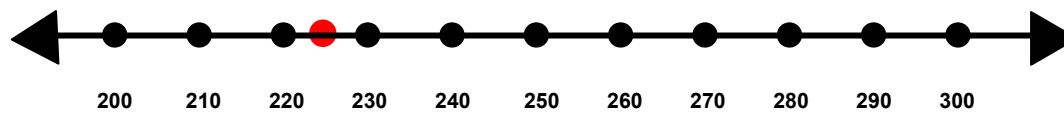


Is 690 closer to 600 or 700? **700**

Does 690 round up or round down to the nearest hundred? **round up**

What is 690 rounded to the nearest hundred? **700**

Show where the number 225 would fall on the number line.



Is 225 closer to 200 or 300? **200**

Does 225 round up or round down to the nearest hundred? **round down**

What is 225 rounded to the nearest hundred? **200**