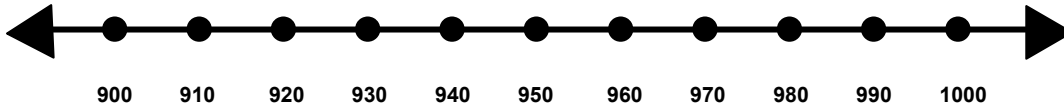


Name _____

Score: _____

Rounding to the Nearest Hundred

Show where the number 925 would fall on the number line.

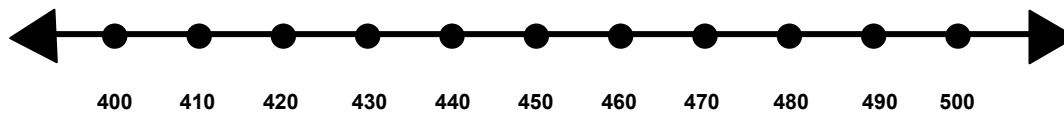


Is 925 closer to 900 or 1000? _____

Does 925 round up or round down to the nearest hundred? _____

What is 925 rounded to the nearest hundred? _____

Show where the number 458 would fall on the number line.

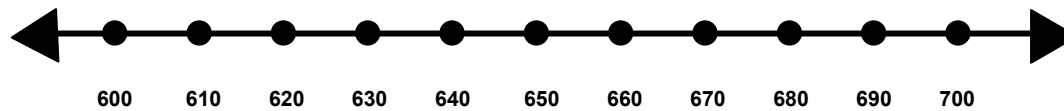


Is 458 closer to 400 or 500? _____

Does 458 round up or round down to the nearest hundred? _____

What is 458 rounded to the nearest hundred? _____

Show where the number 698 would fall on the number line.



Is 698 closer to 600 or 700? _____

Does 698 round up or round down to the nearest hundred? _____

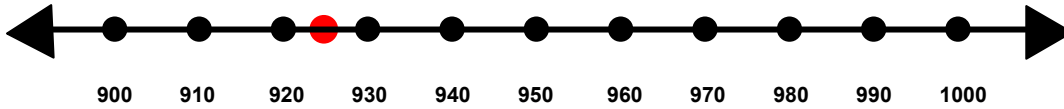
What is 698 rounded to the nearest hundred? _____

Name _____

Score: _____

Rounding to the Nearest Hundred **ANSWER KEY**

Show where the number 925 would fall on the number line.

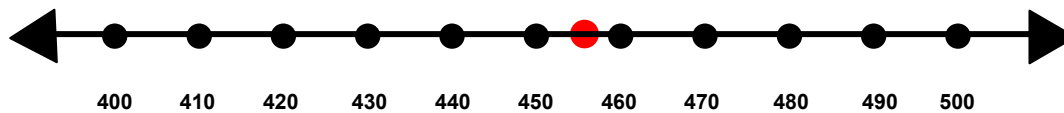


Is 925 closer to 900 or 1000? **900**

Does 925 round up or round down to the nearest hundred? **round down**

What is 925 rounded to the nearest hundred? **900**

Show where the number 458 would fall on the number line.

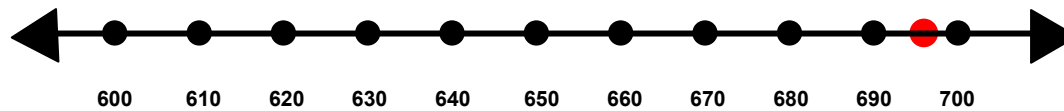


Is 458 closer to 400 or 500? **500**

Does 458 round up or round down to the nearest hundred? **round up**

What is 458 rounded to the nearest hundred? **500**

Show where the number 698 would fall on the number line.



Is 698 closer to 600 or 700? **700**

Does 698 round up or round down to the nearest hundred? **round up**

What is 698 rounded to the nearest hundred? **700**