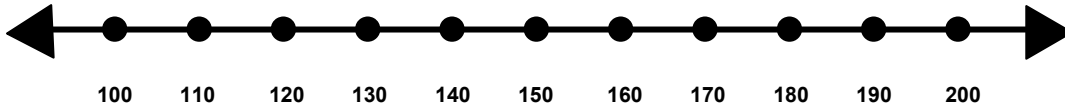


Name _____

Score: _____

Rounding to the Nearest Hundred

Show where the number 115 would fall on the number line.

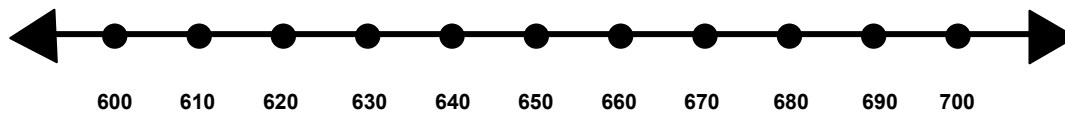


Is 115 closer to 100 or 200? _____

Does 115 round up or round down to the nearest hundred? _____

What is 115 rounded to the nearest hundred? _____

Show where the number 655 would fall on the number line.

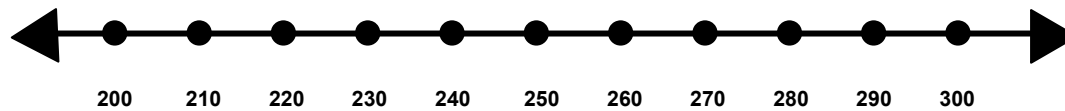


Is 655 closer to 600 or 700? _____

Does 655 round up or round down to the nearest hundred? _____

What is 655 rounded to the nearest hundred? _____

Show where the number 293 would fall on the number line.



Is 293 closer to 200 or 300? _____

Does 293 round up or round down to the nearest hundred? _____

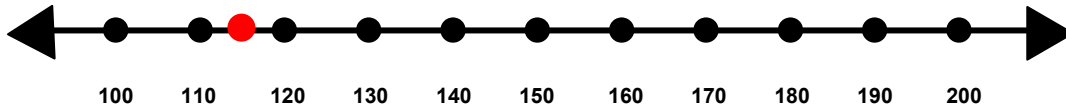
What is 293 rounded to the nearest hundred? _____

Name _____

Score: _____

Rounding to the Nearest Hundred **ANSWER KEY**

Show where the number 115 would fall on the number line.



Is 115 closer to 100 or 200? **100**

Does 115 round up or round down to the nearest hundred? **Round down**

What is 115 rounded to the nearest hundred? **100**

Show where the number 655 would fall on the number line.

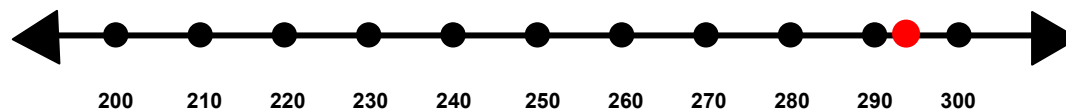


Is 655 closer to 600 or 700? **700**

Does 655 round up or round down to the nearest hundred? **Round up**

What is 655 rounded to the nearest hundred? **700**

Show where the number 293 would fall on the number line.



Is 293 closer to 200 or 300? **300**

Does 293 round up or round down to the nearest hundred? **Round up**

What is 293 rounded to the nearest hundred? **300**