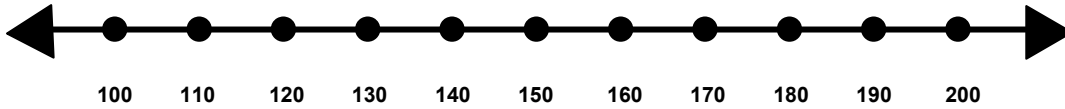


Name _____

Score: _____

Rounding to the Nearest Hundred

Show where the number 180 would fall on the number line.

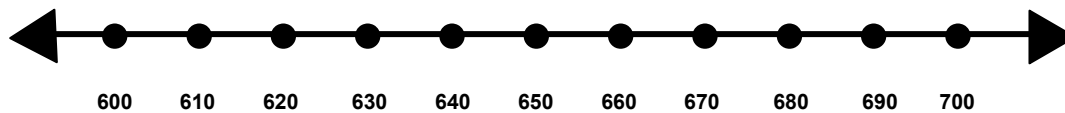


Is 180 closer to 100 or 200? _____

Does 180 rounds up or round down to the nearest hundred? _____

What is 180 rounded to the nearest hundred? _____

Show where the number 630 would fall on the number line.

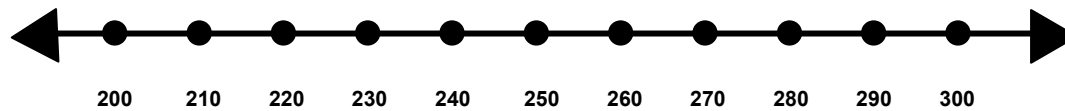


Is 630 closer to 600 or 700? _____

Does 630 round up or round down to the nearest hundred? _____

What is 630 rounded to the nearest hundred? _____

Show where the number 254 would fall on the number line.



Is 254 closer to 200 or 300? _____

Does 254 round up or round down to the nearest hundred? _____

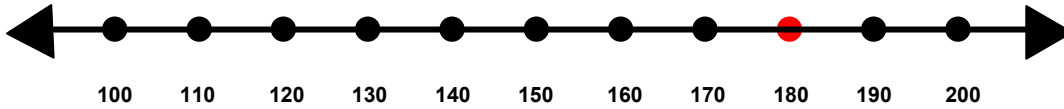
What is 254 rounded to the nearest hundred? _____

Name _____

Score: _____

Rounding to the Nearest Hundred **ANSWER KEY**

Show where the number 180 would fall on the number line.

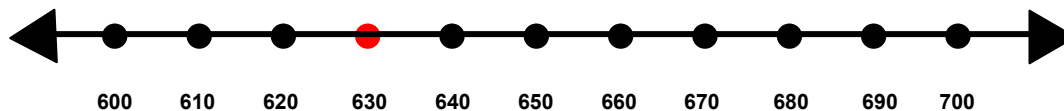


Is 180 closer to 100 or 200? **200**

Does 180 round up or round down to the nearest hundred? **round up**

What is 180 rounded to the nearest hundred? **200**

Show where the number 630 would fall on the number line.

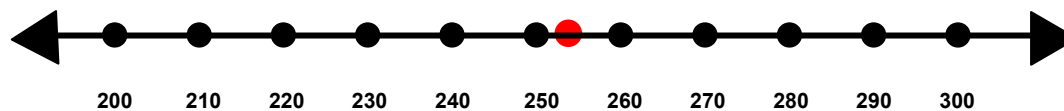


Is 630 closer to 600 or 700? **600**

Does 630 round up or round down to the nearest hundred? **round down**

What is 630 rounded to the nearest hundred? **600**

Show where the number 254 would fall on the number line.



Is 254 closer to 200 or 300? **300**

Does 254 round up or round down to the nearest hundred? **round up**

What is 254 rounded to the nearest hundred? **300**