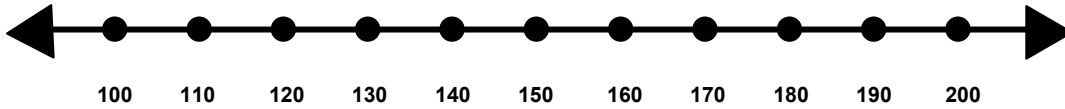


Name _____

Score: _____

Rounding to the Nearest Hundred

Show where the number 123 would fall on the number line.

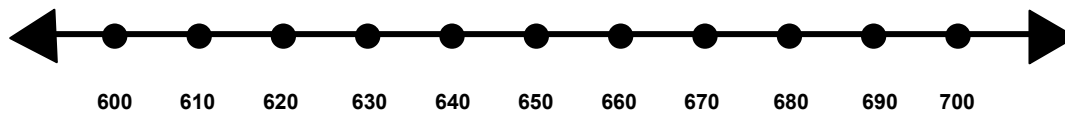


Is 123 closer to 100 or 200? _____

Does 123 round up or round down to the nearest hundred? _____

What is 123 rounded to the nearest hundred? _____

Show where the number 688 would fall on the number line.

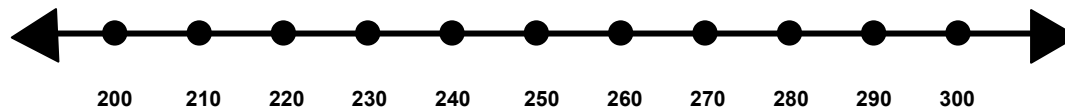


Is 688 closer to 600 or 700? _____

Does 688 round up or round down to the nearest hundred? _____

What is 688 rounded to the nearest hundred? _____

Show where the number 282 would fall on the number line.



Is 282 closer to 200 or 300? _____

Does 282 round up or round down to the nearest hundred? _____

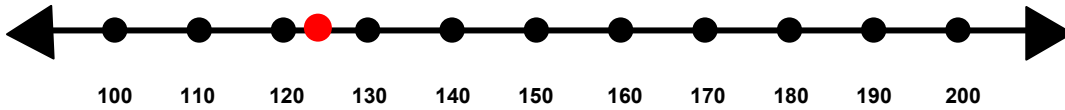
What is 282 rounded to the nearest hundred? _____

Name _____

Score: _____

Rounding to the Nearest Hundred **ANSWER KEY**

Show where the number 123 would fall on the number line.

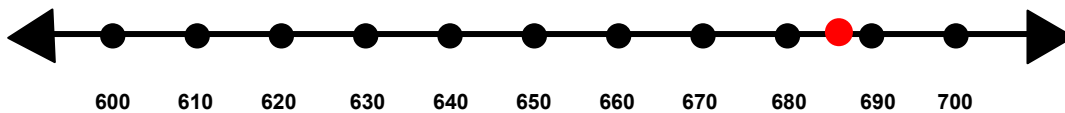


Is 123 closer to 100 or 200? **100**

Does 123 round up or round down to the nearest hundred? **Round down**

What is 123 rounded to the nearest hundred? **100**

Show where the number 688 would fall on the number line.

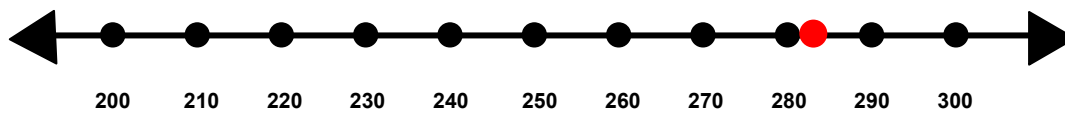


Is 688 closer to 600 or 700? **700**

Does 688 round up or round down to the nearest hundred? **Round up**

What is 688 rounded to the nearest hundred? **700**

Show where the number 282 would fall on the number line.



Is 282 closer to 200 or 300? **300**

Does 282 round up or round down to the nearest hundred? **Round up**

What is 282 rounded to the nearest hundred? **300**