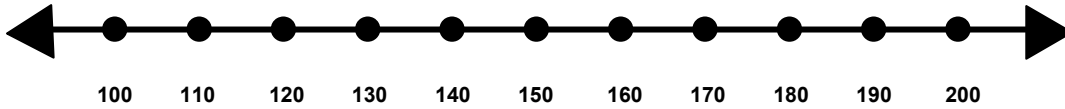


Name _____

Score: _____

Rounding to the Nearest Hundred

Show where the number 154 would fall on the number line.

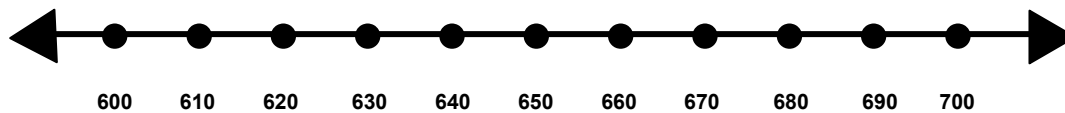


Is 154 closer to 100 or 200? _____

Does 154 round up or round down to the nearest hundred? _____

What is 154 rounded to the nearest hundred? _____

Show where the number 693 would fall on the number line.

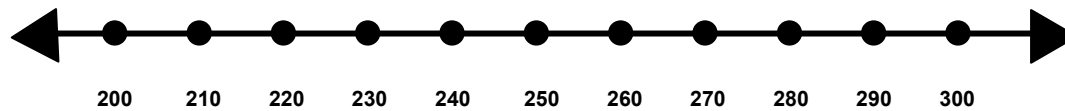


Is 693 closer to 600 or 700? _____

Does 693 round up or round down to the nearest hundred? _____

What is 693 rounded to the nearest hundred? _____

Show where the number 268 would fall on the number line.



Is 268 closer to 200 or 300? _____

Does 268 round up or round down to the nearest hundred? _____

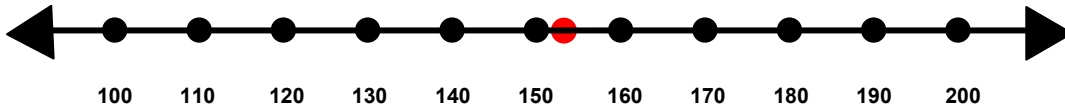
What is 268 rounded to the nearest hundred? _____

Name _____

Score: _____

Rounding to the Nearest Hundred **ANSWER KEY**

Show where the number 154 would fall on the number line.

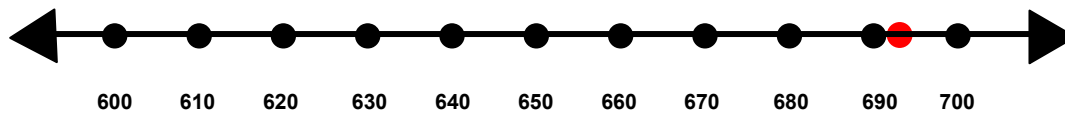


Is 154 closer to 100 or 200? **200**

Does 154 round up or round down to the nearest hundred? **round up**

What is 154 rounded to the nearest hundred? **200**

Show where the number 693 would fall on the number line.

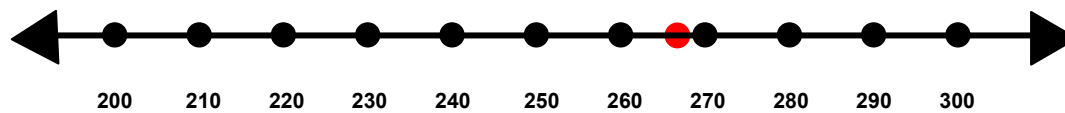


Is 693 closer to 600 or 700? **700**

Does 693 round up or round down to the nearest hundred? **round up**

What is 693 rounded to the nearest hundred? **700**

Show where the number 268 would fall on the number line.



Is 268 closer to 200 or 300? **300**

Does 268 round up or round down to the nearest hundred? **round up**

What is 268 rounded to the nearest hundred? **300**