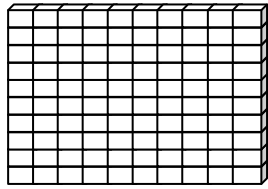


Name _____

Score: _____

Place Value



One Hundred

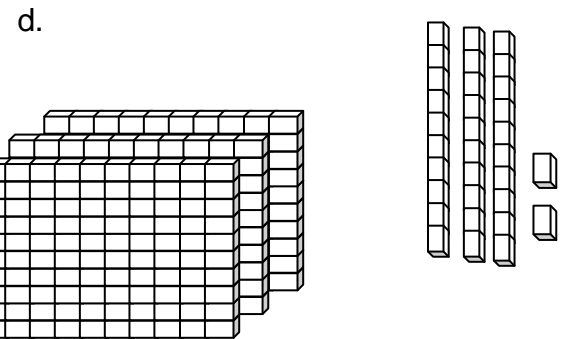
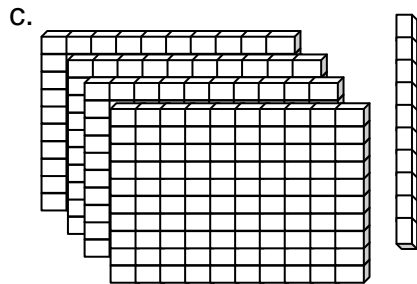
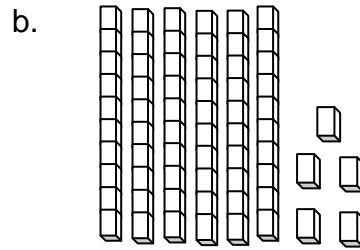
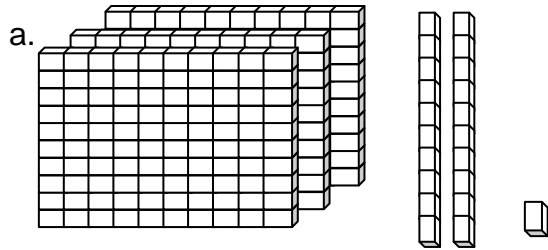


Ten



One

Write each number in standard form.



e. $669 + 21 + 15$

f. $219 + 14 + 12$

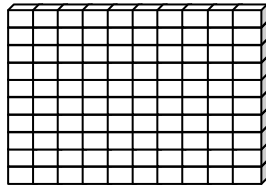
g. $213 + 17$

h. $526 + 64$

Name _____

Score: _____

Place Value **ANSWER KEY**



One Hundred



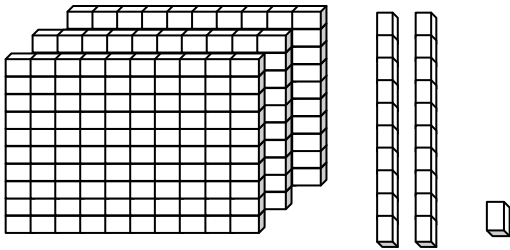
Ten



One

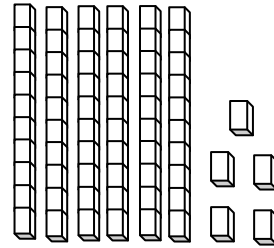
Write each number in standard form.

a.



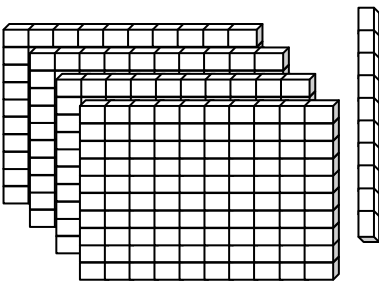
321

b.



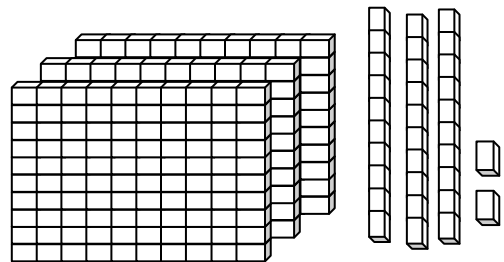
65

c.



410

d.



332

e. $669 + 21 + 15$

705

f. $219 + 14 + 12$

245

g. $213 + 17$

230

h. $526 + 64$

590