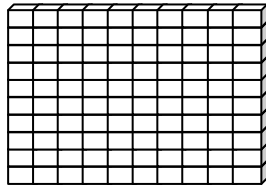


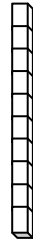
Name _____

Score: _____

Place Value



One Hundred



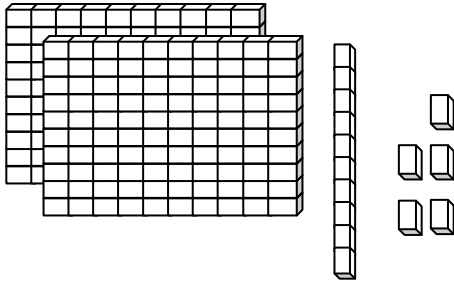
Ten



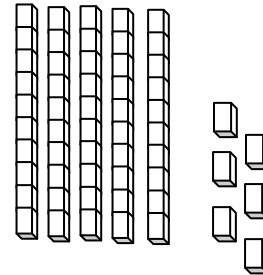
One

Write each number in standard form.

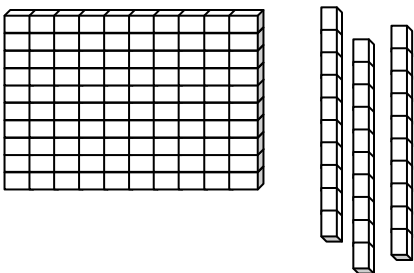
a.



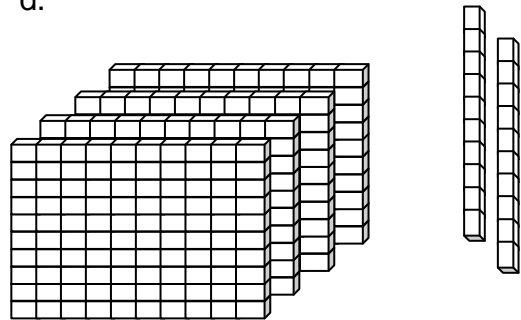
b.



c.



d.



e. $456 + 15 + 86$

f. $687 + 98 + 49$

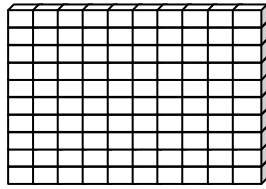
g. $268 + 74$

h. $951 + 356$

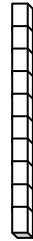
Name _____

Score: _____

Place Value **ANSWER KEY**



One Hundred



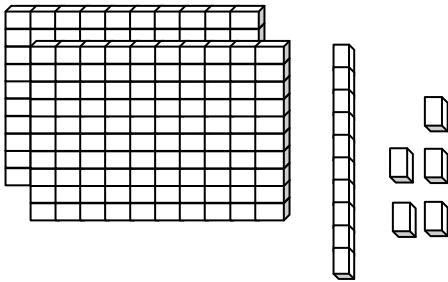
Ten



One

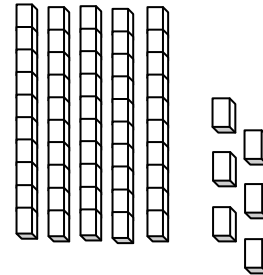
Write each number in standard form.

a.



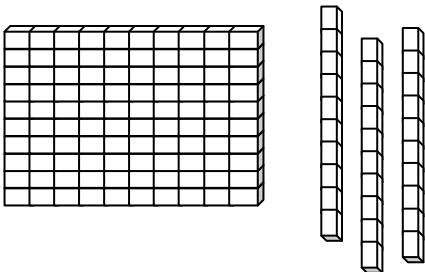
215

b.



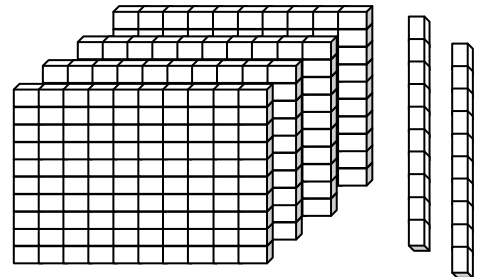
56

c.



130

d.



420

e. $456 + 15 + 86$

557

f. $687 + 98 + 49$

834

g. $268 + 74$

342

h. $951 + 356$

1307