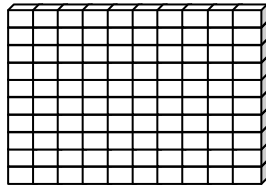


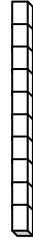
Name \_\_\_\_\_

Score: \_\_\_\_\_

# Place Value



One Hundred

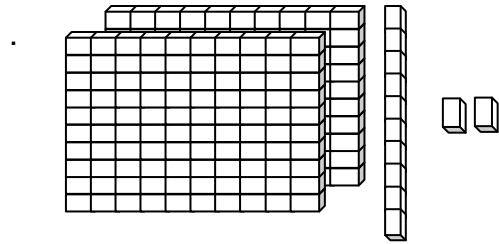


Ten

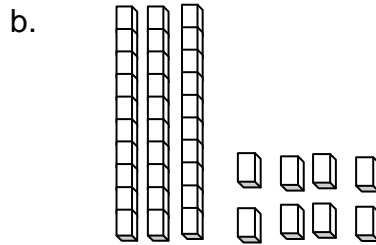


One

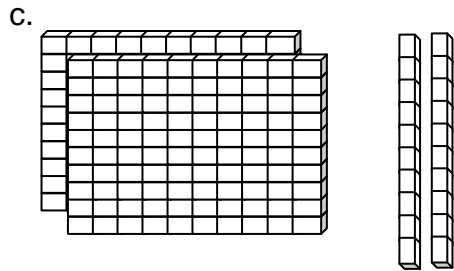
Write each number in standard form.



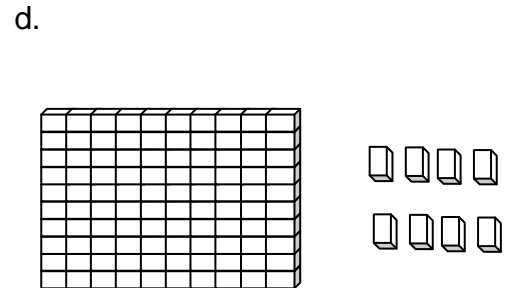
\_\_\_\_\_



\_\_\_\_\_



\_\_\_\_\_



\_\_\_\_\_

e.  $275 + 39 + 15$

\_\_\_\_\_

f.  $199 + 35 + 10$

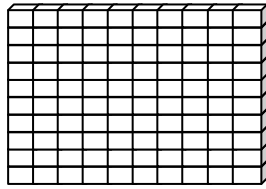
\_\_\_\_\_

g.  $239 + 15$

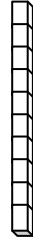
\_\_\_\_\_

h.  $777 + 22$

\_\_\_\_\_

**Place Value ANSWER KEY**

One Hundred



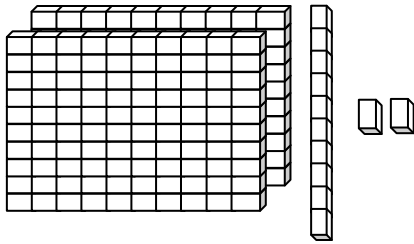
Ten



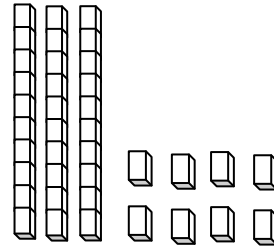
One

Write each number in standard form.

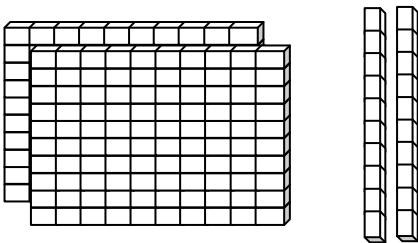
a.

**212**

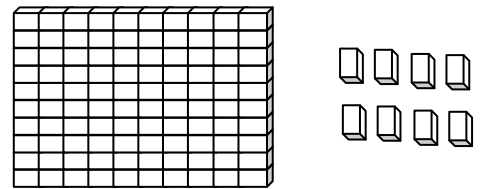
b.

**38**

c.

**220**

d.

**108**

e.  $275 + 39 + 15$

**329**

f.  $199 + 35 + 10$

**244**

g.  $239 + 15$

**254**

h.  $777 + 22$

**799**