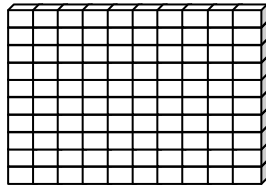


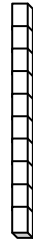
Name _____

Score: _____

Place Value



One Hundred



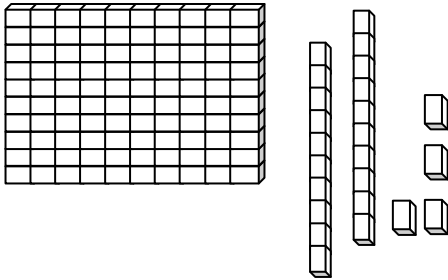
Ten



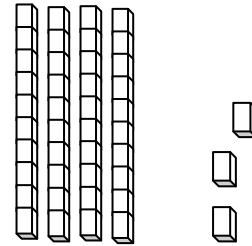
One

Write each number in standard form.

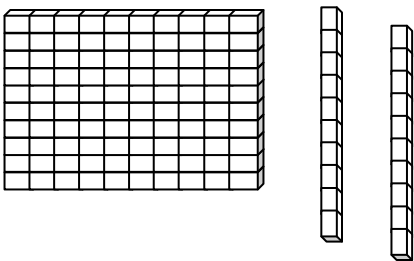
a.



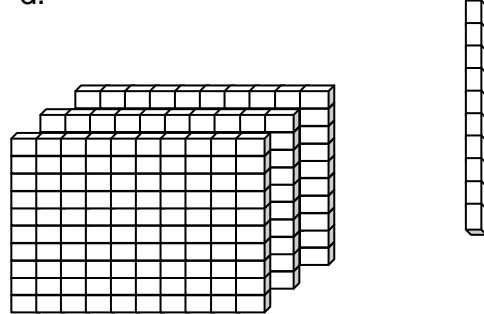
b.



c.



d.



e. $840 + 17 + 20$

f. $465 + 23 + 74$

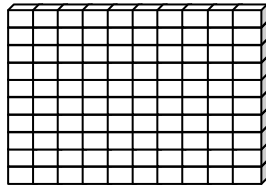
g. $352 + 45$

h. $481 + 123$

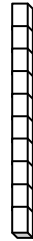
Name _____

Score: _____

Place Value **ANSWER KEY**



One Hundred



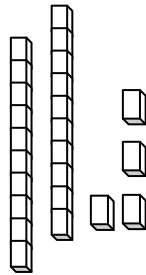
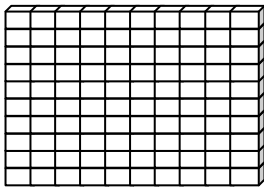
Ten



One

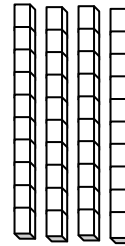
Write each number in standard form.

a.



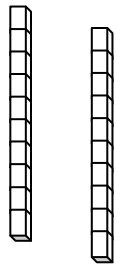
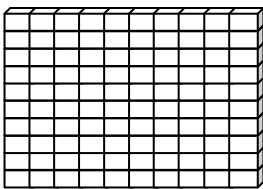
124

b.



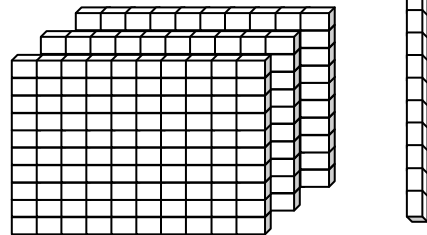
43

c.



120

d.



310

e. $840 + 17 + 20$

877

f. $465 + 23 + 74$

562

g. $352 + 45$

397

h. $481 + 123$

604