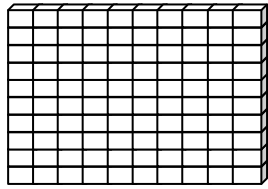


Name _____

Score: _____

Place Value



One Hundred



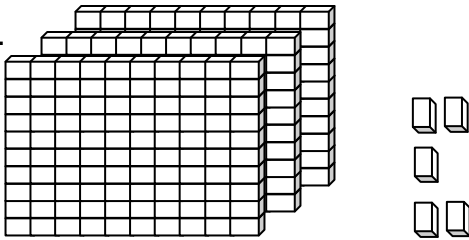
Ten



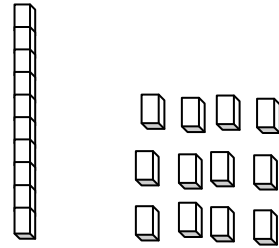
One

Write each number in standard form.

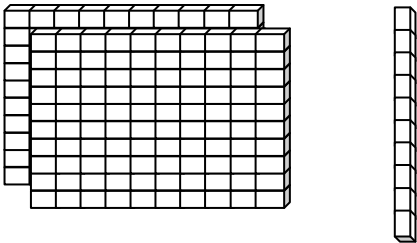
a.



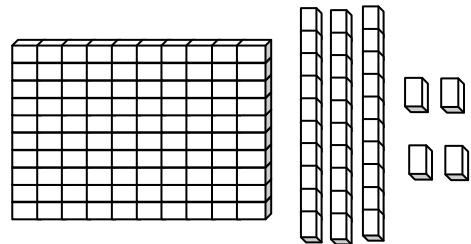
b.



c.



d.



e. $526 + 34 + 75$

f. $140 + 60 + 35$

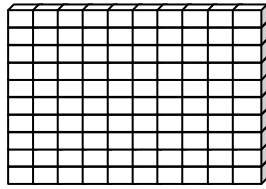
g. $179 + 24$

h. $990 + 8$

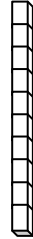
Name _____

Score: _____

Place Value **ANSWER KEY**



One Hundred



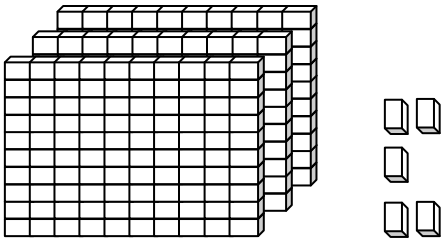
Ten



One

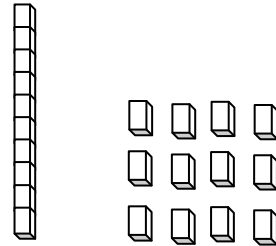
Write each number in standard form.

a.



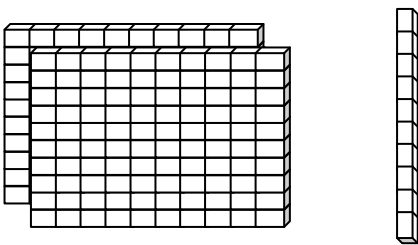
305

b.



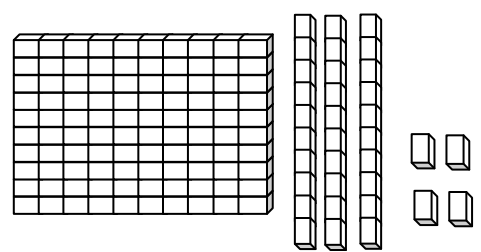
22

c.



210

d.



134

e. $526 + 34 + 75$

635

f. $140 + 60 + 35$

235

g. $179 + 24$

203

h. $990 + 8$

998