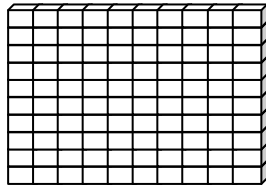


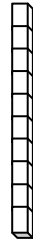
Name _____

Score: _____

Place Value



One Hundred



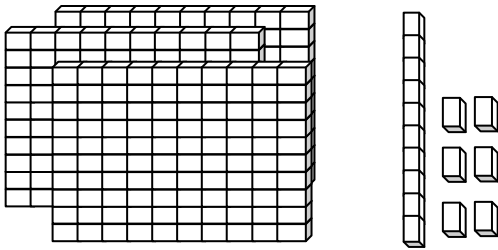
Ten



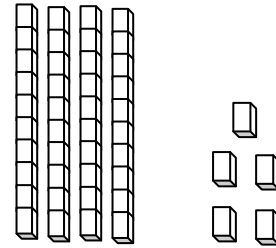
One

Write each number in standard form.

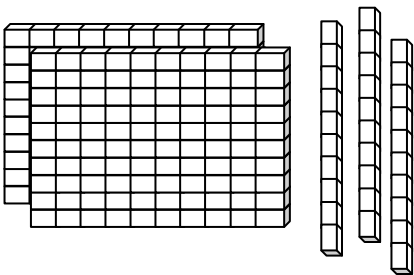
a.



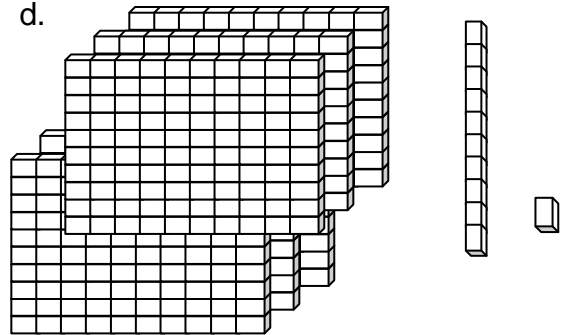
b.



c.



d.



e. $350 + 47 + 63$

f. $845 + 46 + 87$

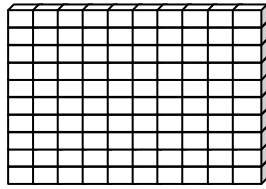
g. $150 + 25$

h. $660 + 57$

Name _____

Score: _____

Place Value **ANSWER KEY**



One Hundred



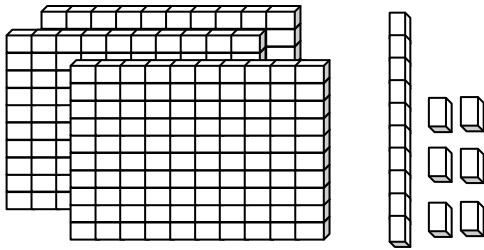
Ten



One

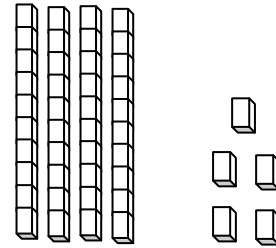
Write each number in standard form.

a.



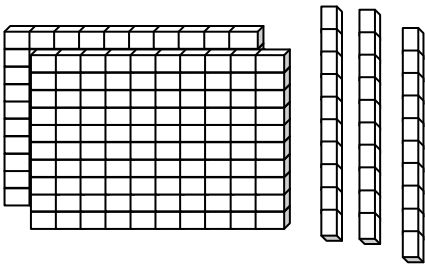
316

b.



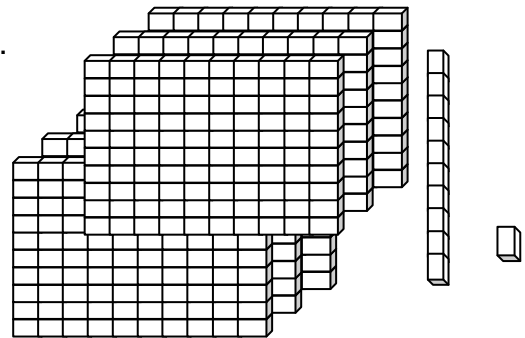
45

c.



230

d.



611

e. $350 + 47 + 63$

460

f. $845 + 46 + 87$

978

g. $150 + 25$

175

h. $660 + 57$

717