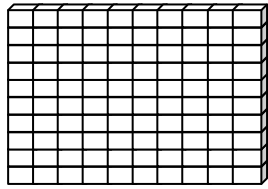


Name \_\_\_\_\_

Score: \_\_\_\_\_

# Place Value



One Hundred



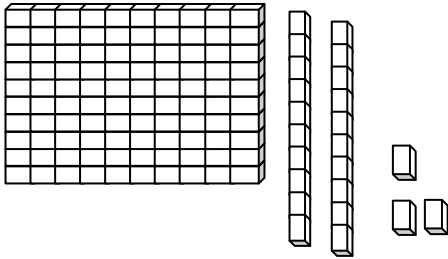
Ten



One

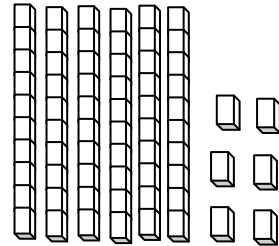
Write each number in standard form.

a.



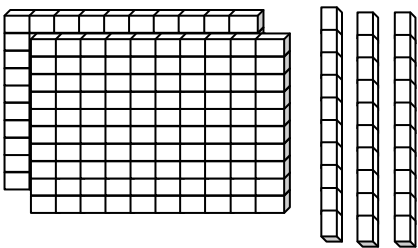
\_\_\_\_\_

b.



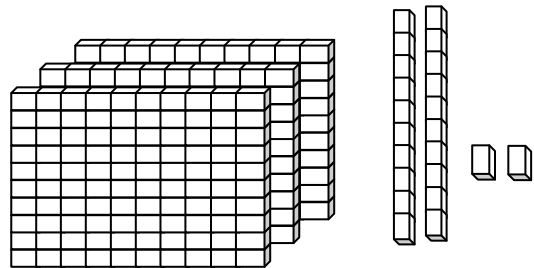
\_\_\_\_\_

c.



\_\_\_\_\_

d.



\_\_\_\_\_

e.  $331 + 29 + 20$

\_\_\_\_\_

f.  $225 + 75 + 55$

\_\_\_\_\_

g.  $169 + 41$

\_\_\_\_\_

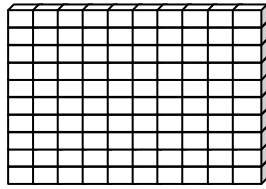
h.  $857 + 33$

\_\_\_\_\_

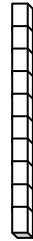
Name \_\_\_\_\_

Score: \_\_\_\_\_

## Place Value **ANSWER KEY**



One Hundred



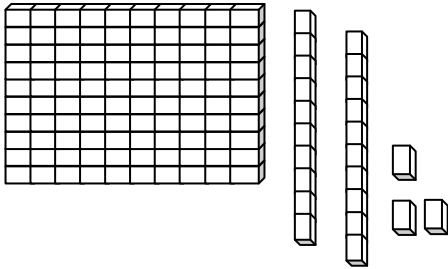
Ten



One

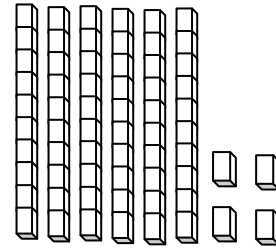
Write each number in standard form.

a.



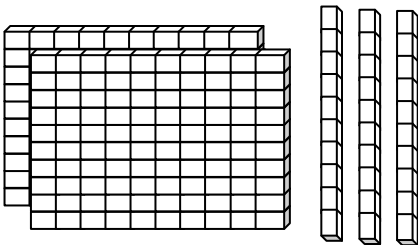
**123**

b.



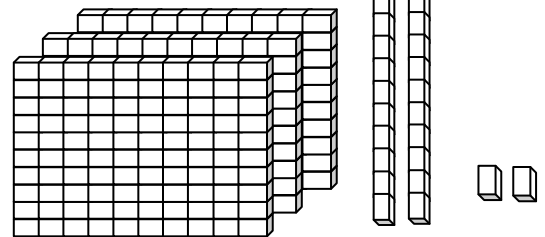
**64**

c.



**230**

d.



**322**

e.  $331 + 29 + 20$

**380**

f.  $225 + 75 + 55$

**355**

g.  $169 + 41$

**210**

h.  $857 + 33$

**890**