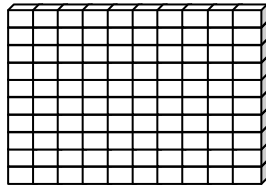


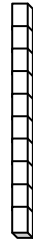
Name \_\_\_\_\_

Score: \_\_\_\_\_

## Place Value



One Hundred



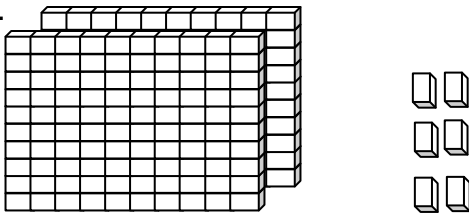
Ten



One

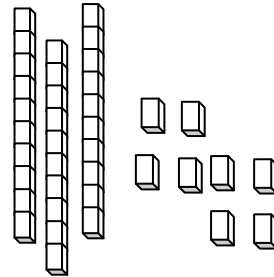
Write each number in standard form.

a.



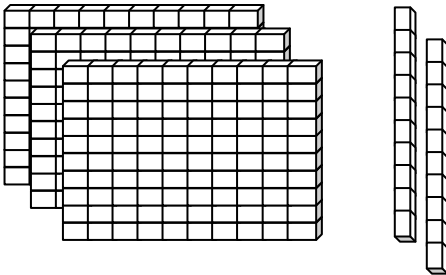
\_\_\_\_\_

b.



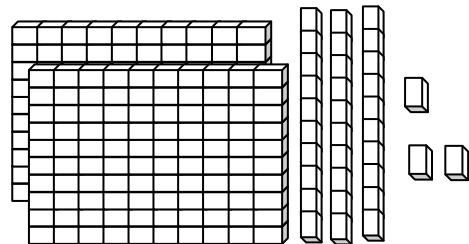
\_\_\_\_\_

c.



\_\_\_\_\_

d.



\_\_\_\_\_

e.  $487 + 16 + 78$

\_\_\_\_\_

f.  $465 + 98 + 41$

\_\_\_\_\_

g.  $480 + 65$

\_\_\_\_\_

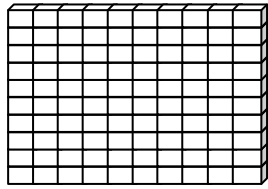
h.  $780 + 90$

\_\_\_\_\_

Name \_\_\_\_\_

Score: \_\_\_\_\_

## Place Value **ANSWER KEY**



One Hundred

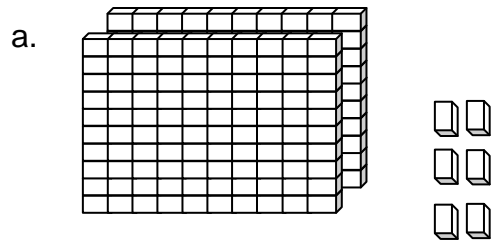


Ten

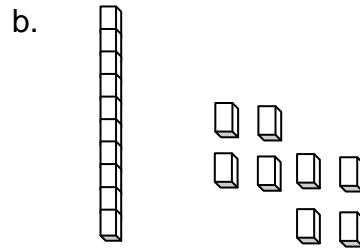


One

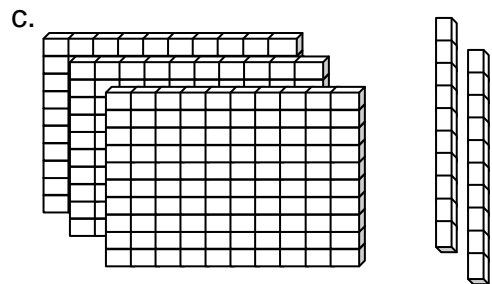
Write each number in standard form.



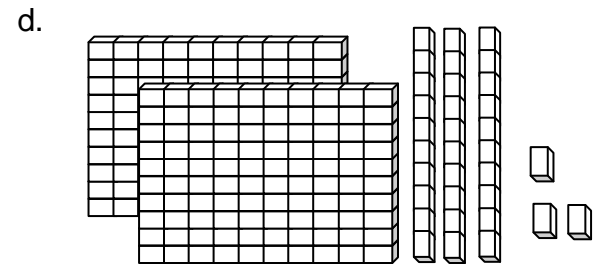
**206**



**18**



**320**



**233**

e.  $487 + 16 + 78$

**581**

f.  $465 + 98 + 41$

**604**

g.  $480 + 65$

**545**

h.  $780 + 90$

**870**