

Name \_\_\_\_\_

Score: \_\_\_\_\_

## Favorite Candy Pictography

Mrs. French and Mr. Miskey are planning a party for their classes. The students are asked to vote for their favorite candy flavor. The list below are the results.

**Strawberry- 5**

**Chocolate- 12**


**Coffee-9**

**Mint- 2**

**Caramel-6**

Use the information from the list to complete the pictograph below and answer the questions.

Flavor	Number of Votes
Strawberry	
Mint	
Caramel	
Coffee	
Chocolate	

Key
 = 2 votes

1. What two flavors did the students like the least?

1. \_\_\_\_\_

2. How many students voted for mint or coffee?

2. \_\_\_\_\_

3. How many students voted for chocolate than caramel?

3. \_\_\_\_\_

4. How many votes were there in all?

4. \_\_\_\_\_

Name \_\_\_\_\_

Score: \_\_\_\_\_

## Favorite Candy Pictography

Mrs. French and Mr. Miskey are planning a party for their classes. The students are asked to vote for their favorite candy flavor. The list below are the results.

**Strawberry- 5**






**Chocolate- 12**


**Coffee-9**

**Mint- 2**

**Caramel-6**

Use the information from the list to complete the pictograph below and answer the questions.

Flavor	Number of Votes
Strawberry	
Mint	
Caramel	
Coffee	
Chocolate	

Key
 = 2 votes

1. What two flavors did the students like the least?

1. Mint & Strawberry

2. How many students voted for mint or coffee?

2. 11

3. How many students voted for chocolate than caramel?

3. 3

4. How many votes were there in all?

4. 34