

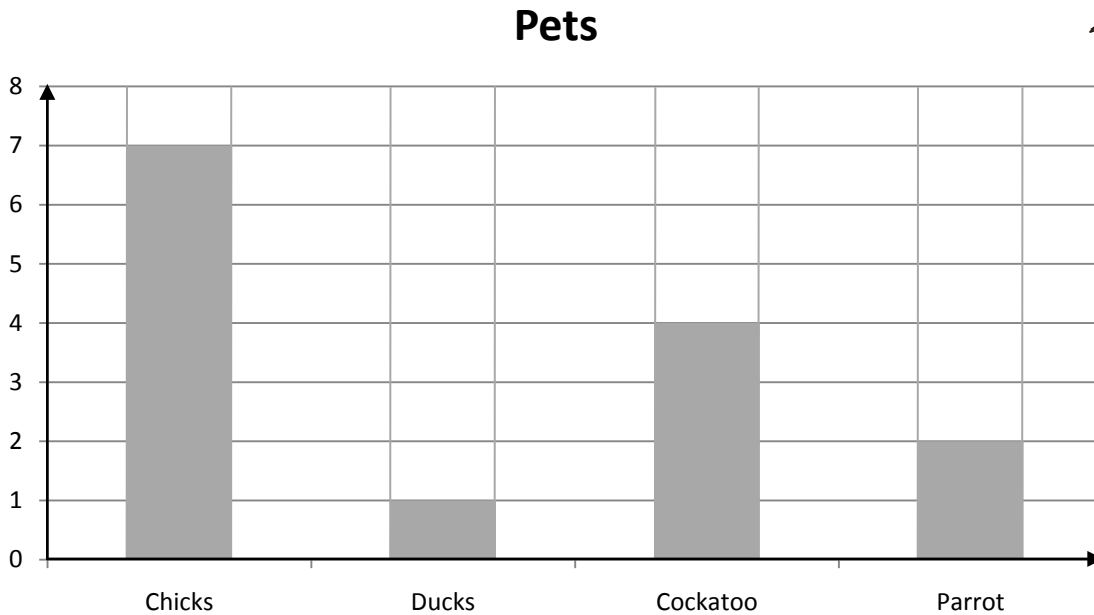


Name _____

Score: _____

Bar Graph of Pets

This is a graph of pets that belong to the students of Miss Smith's class. Use the information from the graph to answer the questions.



1. How many ducks do the students have?

1. _____

2. How many cockatoo's do they have?

2. _____

3. How many parrots do they have?

3. _____

4. How many chicks do they have?

4. _____

5. Do they have more chicks or ducks?


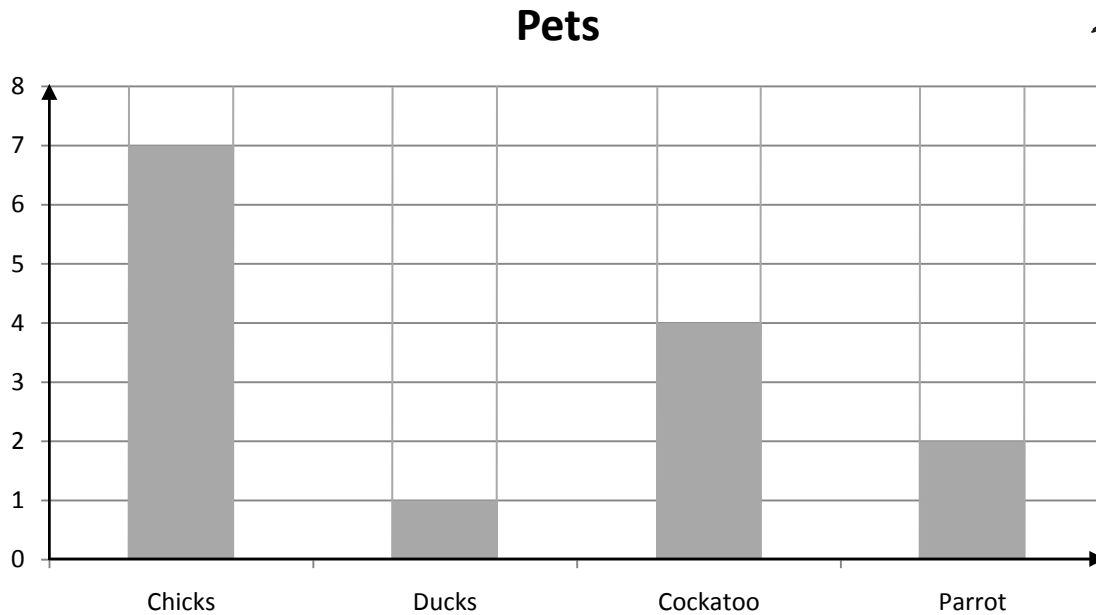
5. _____

Name _____

Score: _____

Bar Graph of Pets

This is a graph of pets that belong to the students of Miss Smith's class. Use the information from the graph to answer the questions.



1. How many ducks do the students have?

1. 1

2. How many cockatoo's do they have?

2. 4

3. How many parrots do they have?

3. 2

4. How many chicks do they have?

4. 7

5. Do they have more chicks or ducks?

5. Chicks